

Methodist Girls' School (Primary)
2009 Mid Year Examination
Primary 1
Mathematics

Name: _____ ()

Class: 1. _____

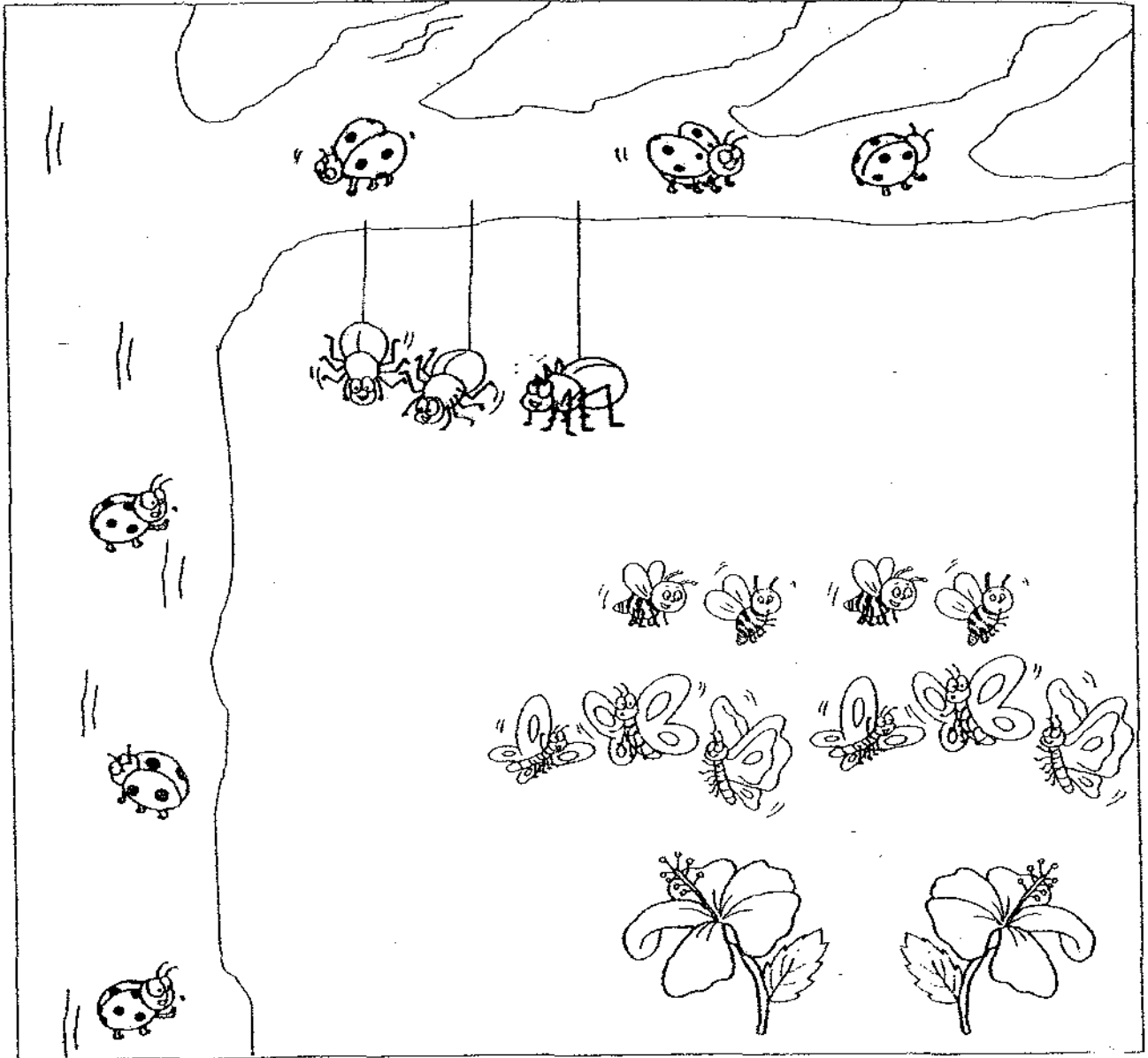
Date: 6 May 2009

Marks Obtained: _____/100

This booklet consists of 16 printed pages.

Section A (6 x 1 marks)


Look at the picture. Count and fill in each blank with the correct number.



1. There are _____ spiders.
2. There are _____ ladybugs.
3. There are _____ bees and butterflies.

Go to page 2





Look at the picture. Count and fill in each blank with the correct number in words.



- 4. There are _____ cakes.
- 5. There are _____ candles.
- 6. I can see _____ hearts on the cakes altogether.

Section B (38 x 2 marks)

7. Tick the boxes that show the same number of fruits.

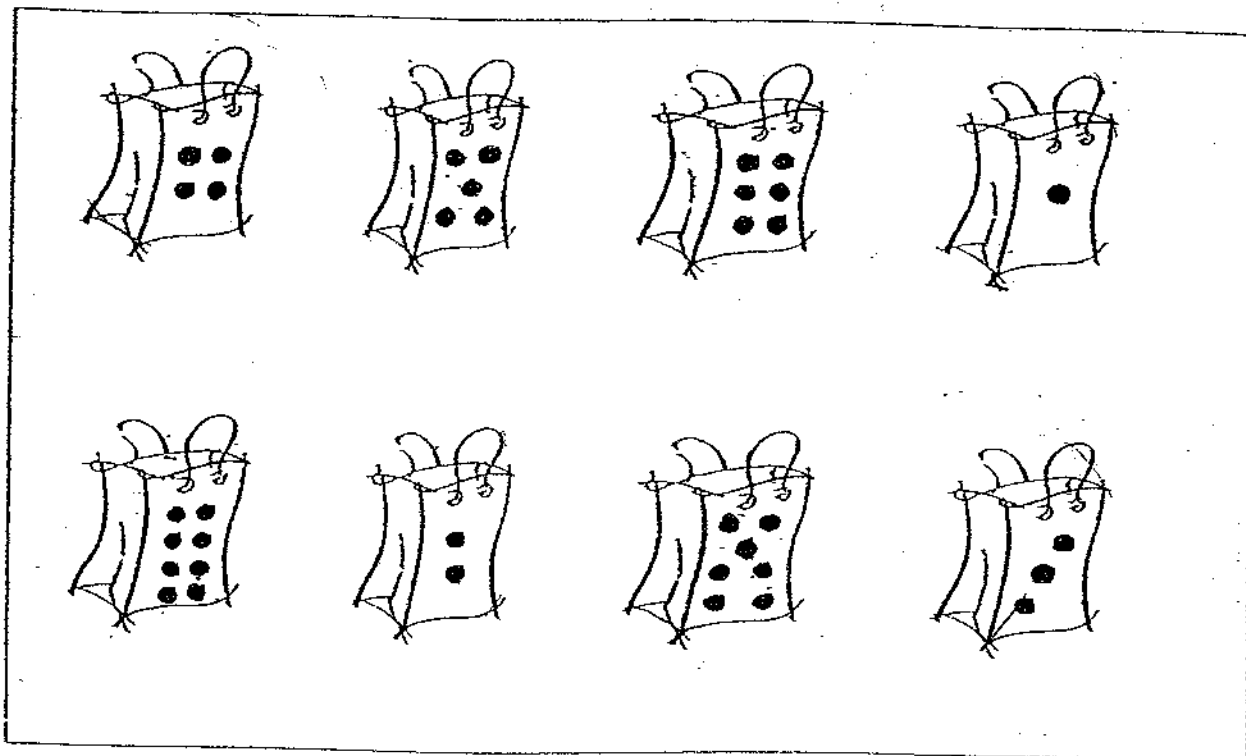
 <input type="checkbox"/>	 <input type="checkbox"/>
 <input type="checkbox"/>	 <input type="checkbox"/>

8. Circle the sets that give an answer that is more than 10.

$5 + 5$	$17 - 10$
$18 + 2$	$15 - 2$

Go to page 4

9. Circle the bags that have less than 5 dots.



Go to page 5

Circle the numbers that add up to the number shown on the left.

10.

8	2	3	4	5
---	---	---	---	---

11.

13	1	3	7	9
----	---	---	---	---

12.

20	2	4	6	10
----	---	---	---	----

Complete the number patterns.

13.

12	13	14	15	16	17	18		
----	----	----	----	----	----	----	--	--

14.

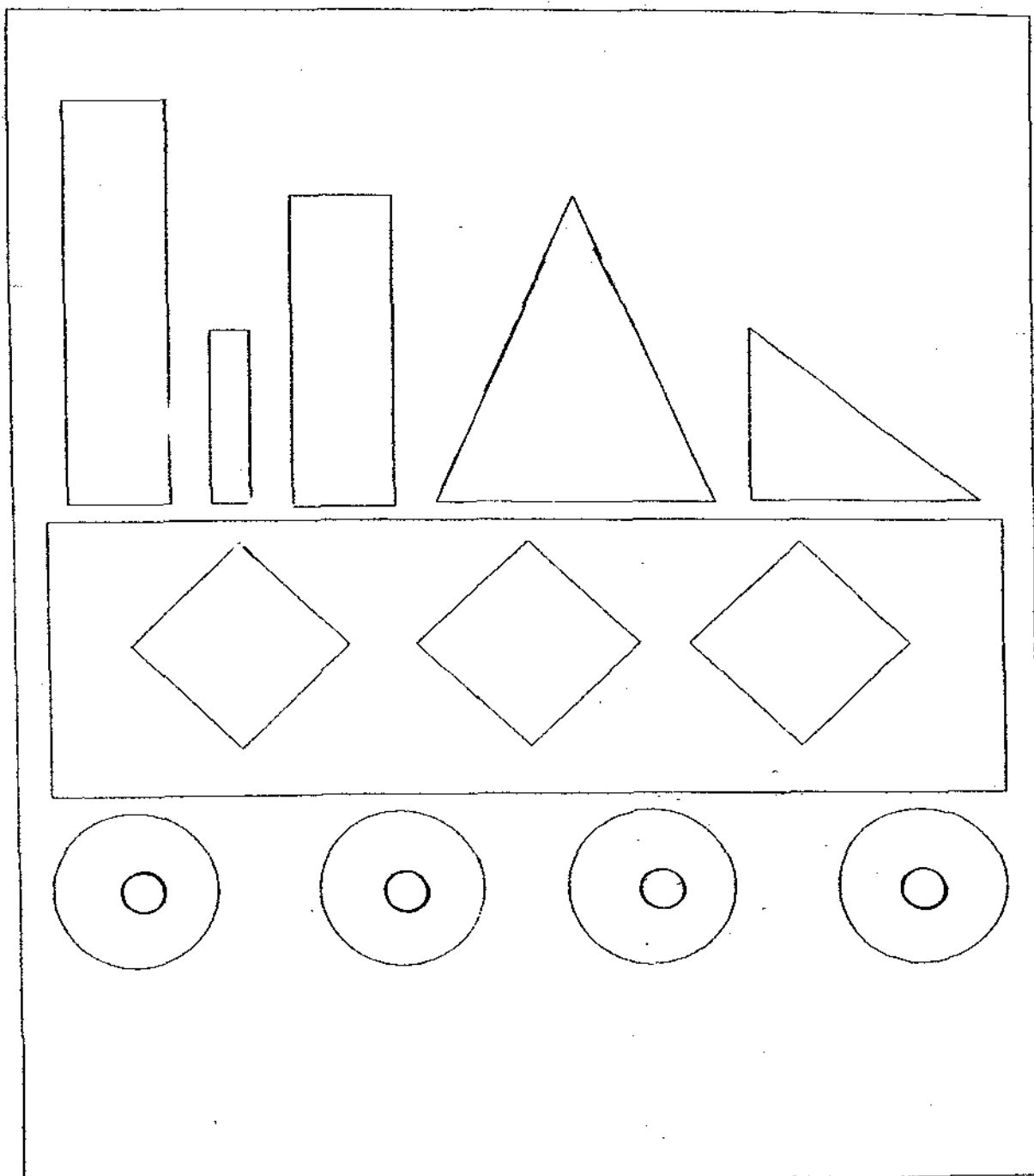
3	5		9		13	15	17	19
---	---	--	---	--	----	----	----	----

15.

20		16	14	12	10		6	4
----	--	----	----	----	----	--	---	---

Go to page 6

Study the picture carefully and answer Questions 16 to 20.



Go to page 7

16. Put an **X** in the bigger triangle.

17. Circle the smallest rectangle.

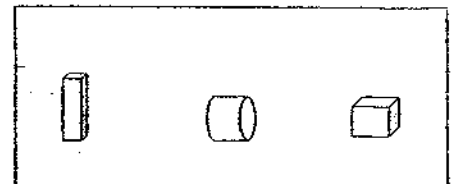
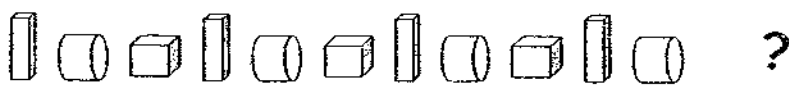
18. Colour all the small circles.

19. There are _____ squares.

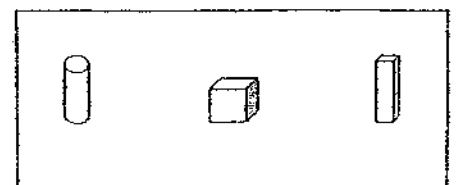
20. There are _____ more circles than triangles.

Which pattern comes next? Circle the correct answer in the box.

21.



22.



Go to page 8

Use the numbers in the box to answer Questions 23 to 27.

11	6	18	14	4
----	---	----	----	---

23. is the smallest number.

24. is the greatest number.

25. is less than 14 but greater than 6.

26. 4 less than 18 is .

27. and make 15.

Go to page 9

Draw lines to match the boxes with the same answers.

28. **2 more than 17** ●

● **19 - 2**

29. **5 less than 15** ●

● **2 + 8 + 8**

30. **3 more than 14** ●

● **9 - 7**

31. **10 less than 12** ●

● **20 - 1**

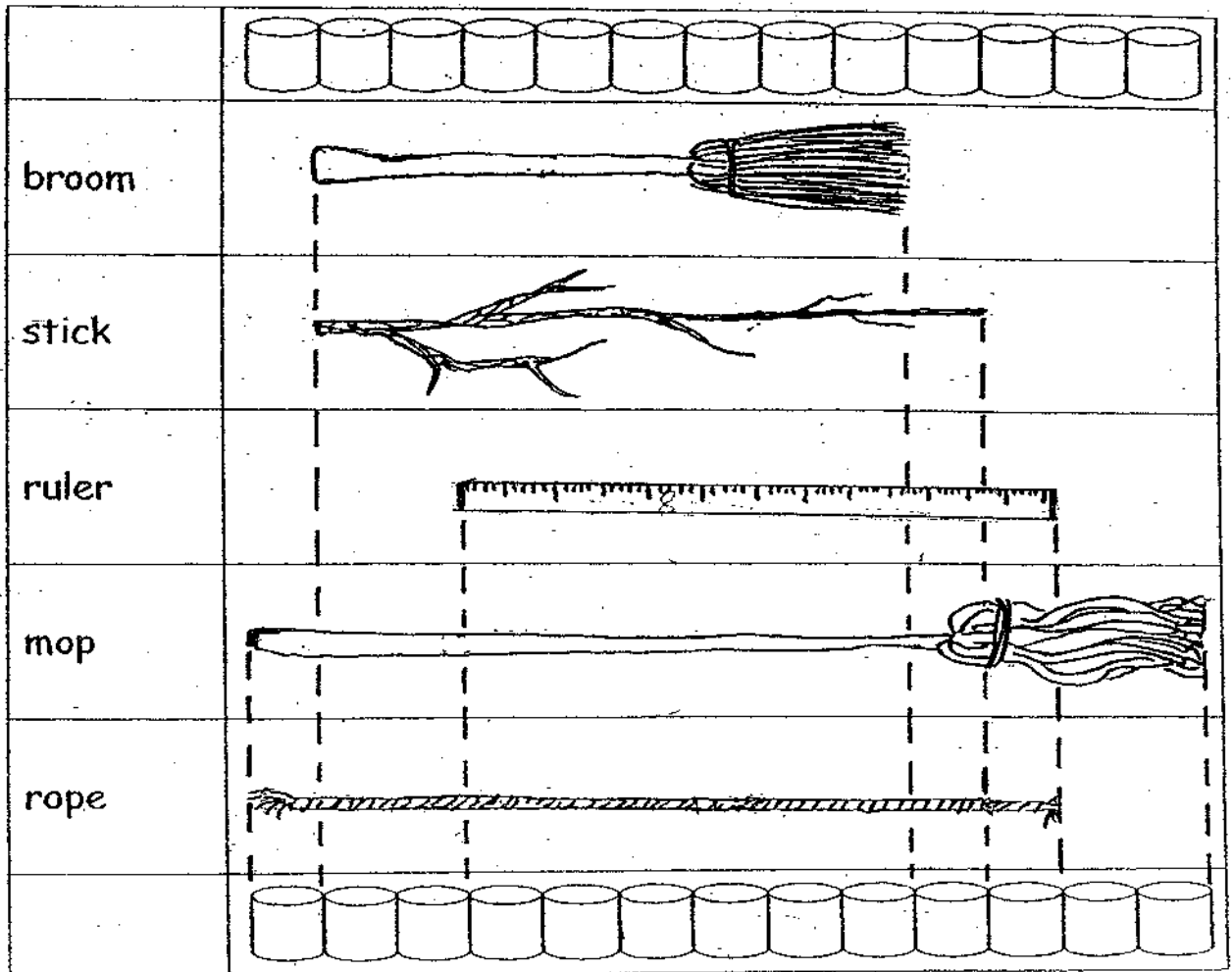
32. **10 more than 8** ●

● **2 + 3 + 5**

Go to page 10

Each  stands for 1 unit.

Study the picture below and answer Questions 33 to 35.




33. The _____ is the longest.

34. The stick is shorter than the _____ and _____.

35. The _____ is as long as the _____.

Study the picture below and answer Questions 36 to 38.




36. _____ is the shortest

37. _____ is the tallest.

38. Anna is taller than _____ and _____.

Go to page 12

Some children are standing in a queue.
Study the picture below and answer Questions 39 to 42.



39. _____ is 1st in the queue.

40. Tara is _____ in the queue.

41. Zana is just after _____ but before _____.

42. Ivin and Zana do not want to wait. They go away.

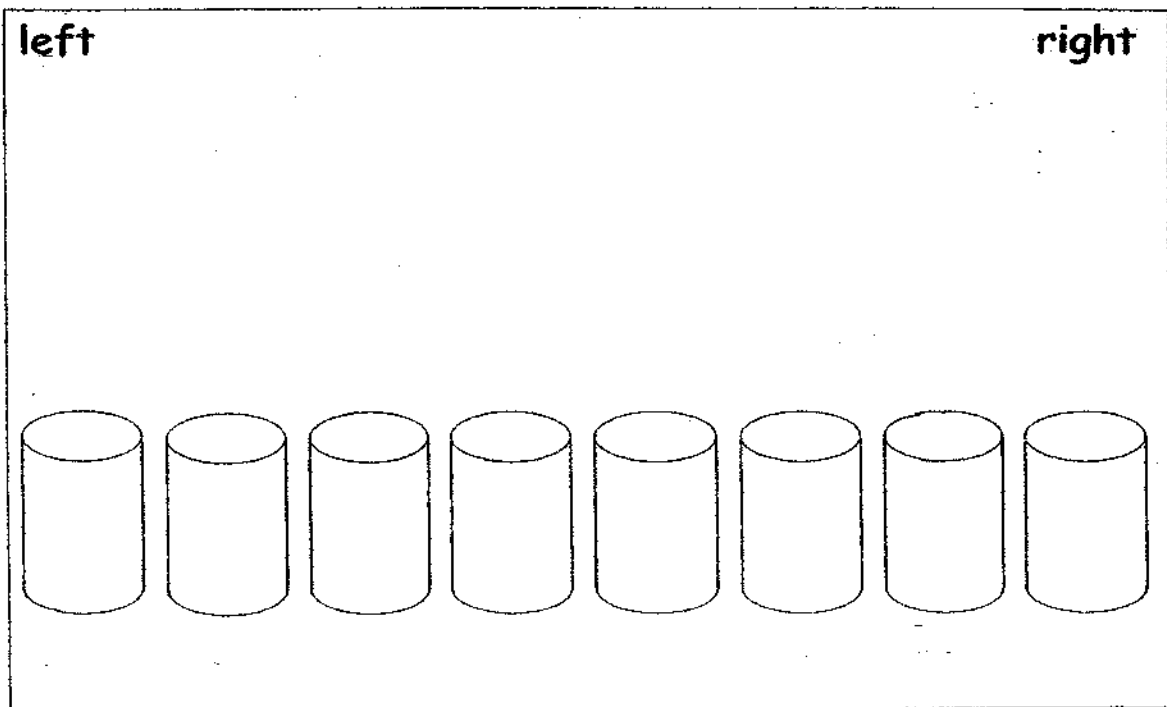
Now, Milly is _____ in the queue.

Go to page 13

Study the picture below and answer Questions 43 and 44.

43. Draw two flowers in the 2nd container from the right.

44. Draw three stones in the 5th container from the left.



Go to page 14

Section C (6 x 3 marks)

Do the Story Sums.

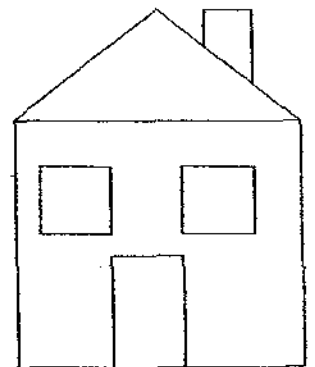
- 45) Ali picks 3 seashells. Devi picks 4 seashells. Jamie picks 2 seashells.
How many seashells do they pick altogether?



$$\square \quad \bigcirc \quad \square \quad \bigcirc \quad \square \quad \bigcirc \quad = \quad \square$$

They pick _____ seashells altogether.


- 46) There were 5 kittens in the house.
2 kittens ran out of the house to play.
How many kittens are left in the house?



$$\square \quad \bigcirc \quad \square \quad \bigcirc \quad \square$$

There are _____ kittens left in the house.


- 47) Gopal has 18 marbles.
John has 7 marbles less than him.
How many marbles does John have?



$$\square \quad \bigcirc \quad \square \quad = \quad \square$$

John has _____ marbles.

- 48) Susan had some fishes in her fish tank.
3 fishes died.
There are 15 fishes left.
How many fishes did Susan have at first?

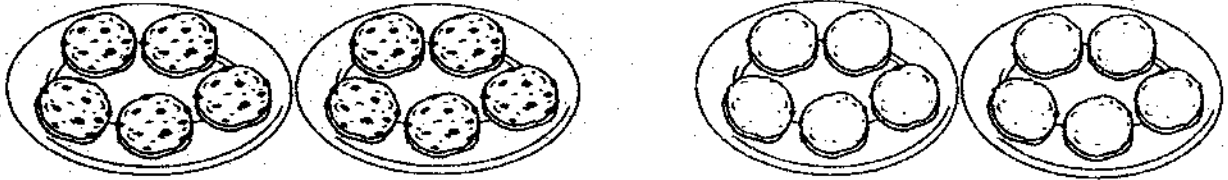


$$\square \quad \bigcirc \quad \square \quad = \quad \square$$

Susan had _____ fishes at first.

Go to page 16


- 49) Jessie had 10 chocolate chip cookies and 10 cream cookies.
She gave 4 cookies to her friends.
How many cookies does she have now?



$$\square \quad \bigcirc \quad \square \quad \bigcirc \quad \square \quad \bigcirc \quad = \quad \square$$

She has _____ cookies now.

- 50) 18 bunnies were playing near a tree.
Some bunnies hopped away. There are 12 bunnies left.
How many bunnies hopped away?



$$\square \quad \bigcirc \quad \square \quad \bigcirc \quad = \quad \square$$

_____ bunnies hopped away.



EXAM PAPER 2009



**SCHOOL : MGS PRIMARY
SUBJECT : PRIMARY 1 MATHEMATICS**

TERM : SA1

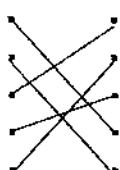
1)3 2)6 3)10 4)eight 5)fifteen 6)thirteen 7)B,C

8)18+2, 15-2 9)  10)3,5 11)1,3 12)4,6,10

13)19,20 14)7,11 15)18,8 16) Δ 17)  18) 

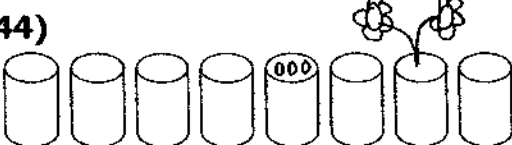
19)3 20)6 21)  22)  23)4 24)18 25)11 26)14

27)11 and 4

28) 
29)
30)
31)
32)

33)mop 34)mop and rope 35)broom, ruler 36)Bala 37)Dawei

38)Cindi and Bala 39)Jeni 40)3rd 41)Fanny , Milly 42)4th

43)44) 

45)3+4+2=9
They pick 9 seashells altogether.

46)5-2=3
There are 3 kittens left in the house.

47)18-7=11
John has 11 marbles.

48)15+3=18
Susan had 18 fishes at first.

49)10+10-4=16
She has 16 cookies now.

50)18-12=6
6 bunnies hopped away.