



NAN HUA PRIMARY SCHOOL  
PRIMARY ONE SEMESTRAL ASSESSMENT 1 - 2009

MATHEMATICS

Duration : 1 hour

INSTRUCTIONS TO CANDIDATES

1. Write your name, register number and class in the blanks provided.
2. Do not turn over this page until you are told to do so.
3. Follow all instructions carefully.
4. Answer all questions.
5. Write your answers in this booklet.

---

Marks Obtained

Total Marks:

	/ 50
--	------

Name : \_\_\_\_\_ ( )


Class : P 1 \_\_\_\_\_

Date : 13 May 2009

Parent's Signature : \_\_\_\_\_

**Section A ( 2 marks each )**

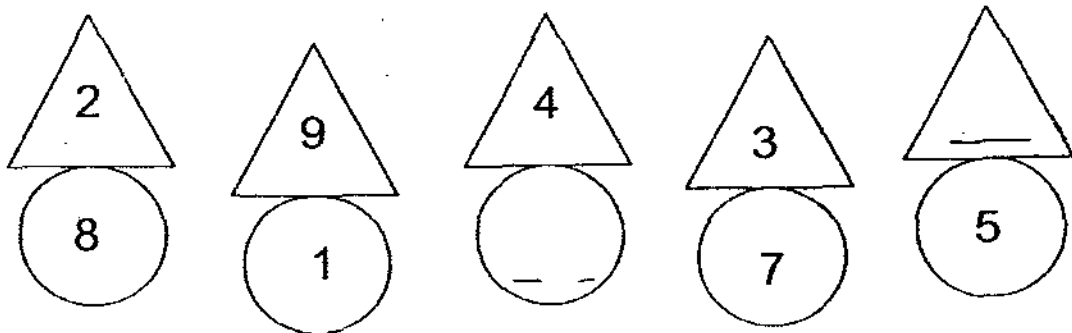
1. Count and write the **numeral** in the box given.



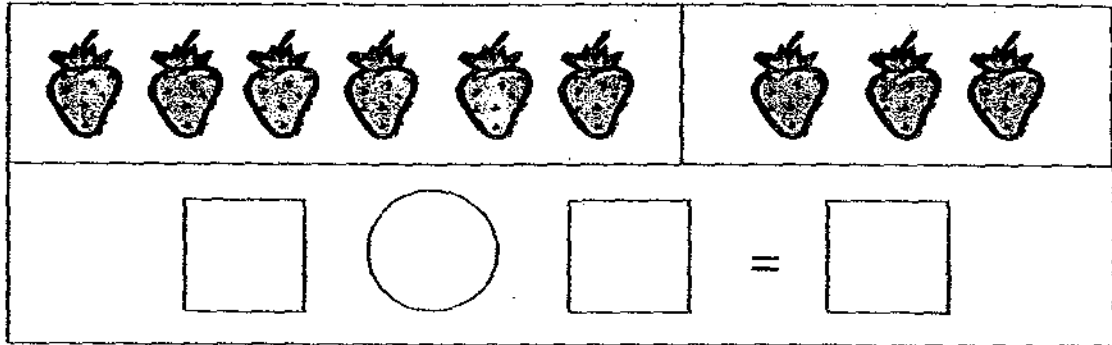
2. Write in words.

**12** →


3. Look at the number pattern.  
Fill in the missing numerals.



4. Look at the picture below and write an **addition sentence**.




5. Study the number pattern and fill in the missing numbers.



**Section B ( 2 marks each )**

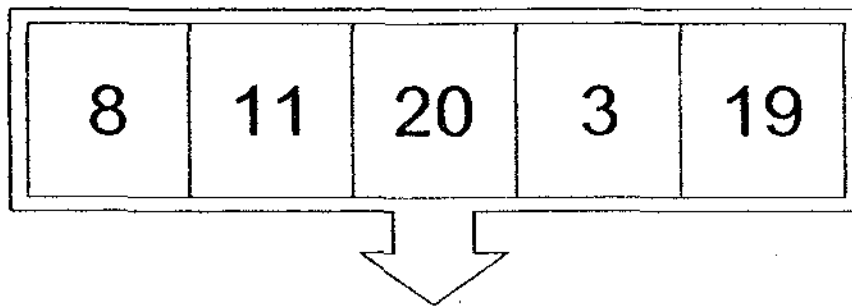
6. Cross out (X) 2 



is 2 less than 9.

**Section C ( 2 marks each )**

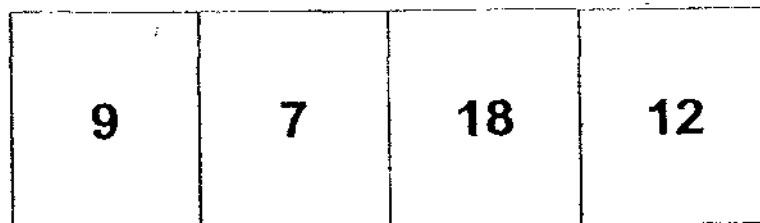
7. Arrange the numbers in order.  
Begin with the **greatest** number.



---

**Greatest**

8. Circle the number that is greater than 10 but smaller than 15 .



9. Draw a line to show the two parts in the box.  
Complete the number bond.

The number bond consists of a large empty oval on the left, connected by lines to two smaller ovals on the right. The top oval contains the number 7, and the bottom oval contains the number 8. To the right of the number bond is a rectangular box containing 15 heart shapes arranged in three rows: the first row has 4 hearts, the second row has 4 hearts, and the third row has 7 hearts.

10. Circle the 5<sup>th</sup> letter from the right.

**A B C D E F G H**

- 11.

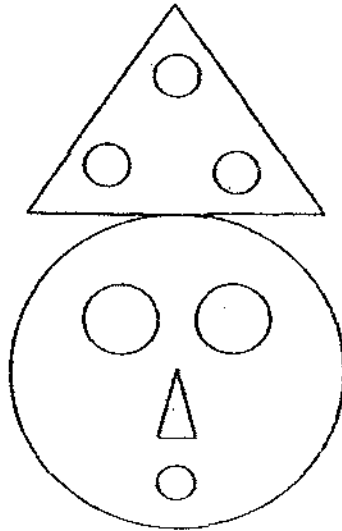


The shape above is a



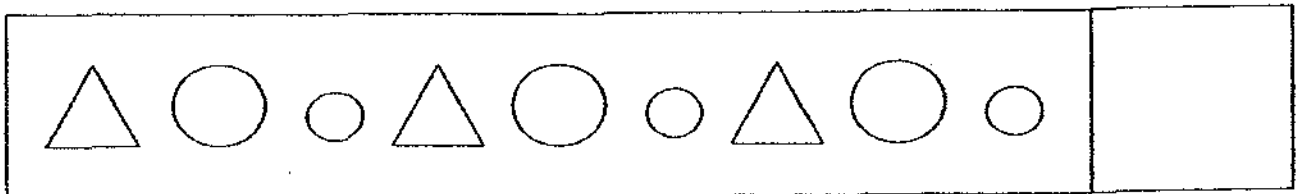
**Section D ( 2 marks each )**

Look at the picture and fill in the boxes.



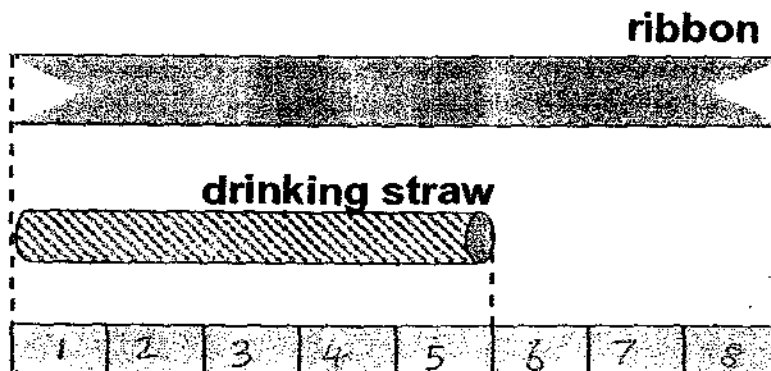
12. There are  more circles than triangles.

13. Draw the shape that comes next in the pattern.



**Section E ( 1 mark each )**

For Question 14, fill in the blank with the correct answers.








14a. The drinking straw is \_\_\_\_\_  long.

14b. The total length of the ribbon and the drinking straw is \_\_\_\_\_  long.

**Section F( 2 marks each )**

15. Colour the **apples** that match the number in the circle.

				
---	---	---	--	---

**Section G ( 2 marks each )**

Write '+' or '-' in each circle.

16. 8  2 = 6

17. 13  4 = 9

Look at the table below.

Fill in the blanks with the correct answers.

1	2	3	4	5	6	7	8	9	10
11	12	13	14	15	16	17	18	19	20

18.  is between 11 and 13.

19.  comes just before 15.


**Section H ( 2 marks each )**

Fill in the boxes with the correct answers.


20. Aini and her friends are standing in a straight line.  
She is 3<sup>rd</sup> from the left and 4<sup>th</sup> from the right.

There are  children altogether.


21. Look at the sets below and fill in the blank.



**Set A**



**Set B**



**Set C**

Set  has 2 more ☀ than Set C.

**Section I ( 4 marks each )**

Do the sums carefully. Show your workings clearly.

22. There are 3 lions and 5 tigers in the zoo.  
How many animals are there altogether?



$$\square \quad \bigcirc \quad \square = \square$$

There are \_\_\_\_\_ animals altogether.

23. There are 13 oranges and 9 oranges are bad.  
How many oranges are good ?



$$\square \quad \bigcirc \quad \square = \square$$

\_\_\_\_\_ oranges are good.

*Have you checked your work ?*



---

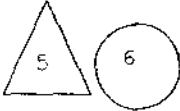


EXAM PAPER 2009

---

SCHOOL : NAN HUA PRIMARY SCHOOL  
SUBJECT : PRIMARY 1 MATHEMATICS

TERM : SA 1

---

- 1)6      2)twelve      3)       4) $6+3=9$       5)12,6
- 6)7      7)20,19,11,8,3      8)12      9)15      10)D
- 11)rectangle      12)5      13)       14)a)5      b)13
- 15) $16-9, 2+5$       16) -      17) -      18)12      19)14
- 20)There are 6 children altogether.
- 21)Set B has 2 more  than Set C.
- 22) $3+5=8$   
There are 8 animals altogether.
- 23) $13-9=4$   
4 oranges are good.

---end---