

Pei Chun Public School
Semestral Assessment 1 – 2009
Mathematics
Primary 1

Name: _____ ()

Date: 14 May 2009

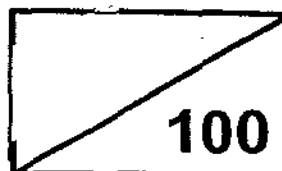
Class: Primary 1 _____

Parent's Signature: _____

Time: 1 h 30 min



Marks:

Maths Teacher: _____



Section A (38 × 2 marks)

Count and write the correct number in each box.

<p>1.</p>  <p><input type="text"/></p>	<p>2.</p>  <p><input type="text"/></p>
--	---


3. Write in words.

19 _____

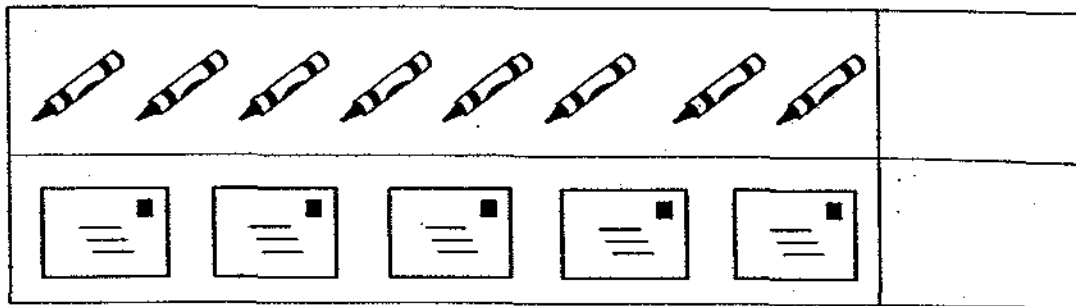
4. Write the number.

Twelve _____


5. Colour 6 hearts.



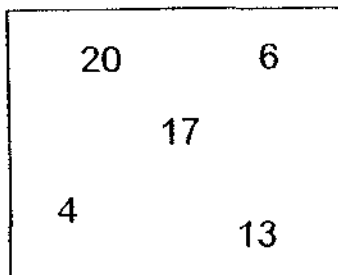
6. Tick (✓) the set that has more.



7. Tick (✓) the set that has less.



8. Arrange these numbers in order.
Begin with the greatest number.



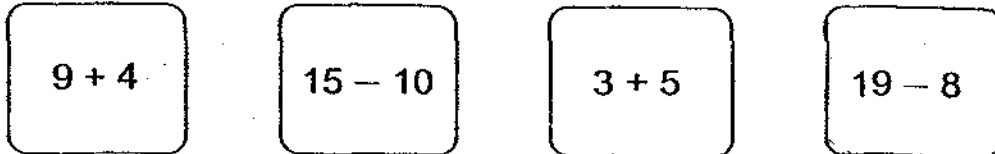
_____ , _____ , _____ , _____
greatest

26

9. Fill in the missing numbers.



10. Circle the answers that are more than 9.



11.

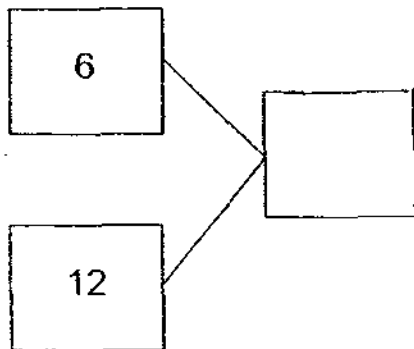


Mandy has 6 stars.

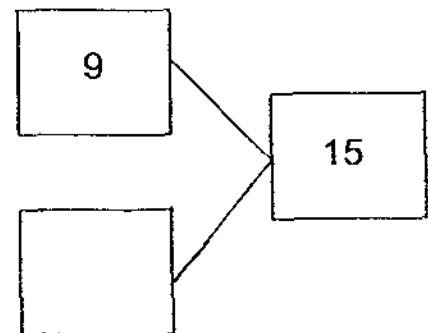
She must add _____ more stars to make 11 stars.

Write the missing numbers in the boxes.

12.



13.



27

14. Circle the sum that matches the number on the left.

14	$8 + 9$	$7 + 8$	$6 + 7$	$5 + 9$
----	---------	---------	---------	---------

15. Circle the shortest tree.



Look at the pictures below and answer questions 16 and 17.



16. The _____ is second from the left.

17. The _____ is fifth from the right.

Do these sums.

18. comes just after 19.

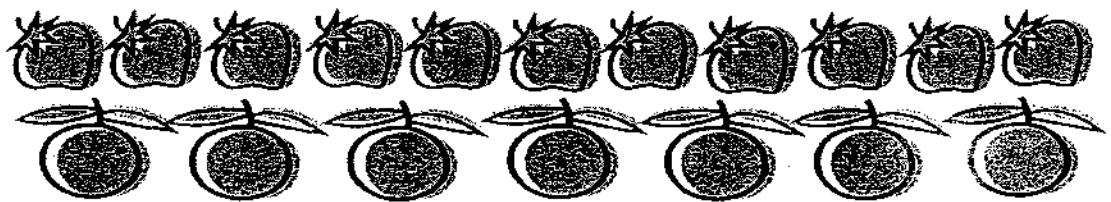
19. comes just before 14.

20. 15 is between and 16.

21. 5 less than is 4.

22. is 3 more than 15.

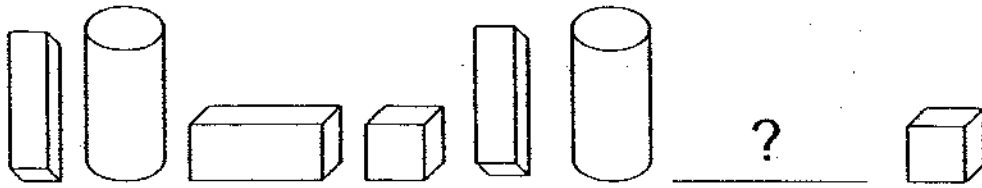
23. There are 11 strawberries and 7 oranges.
How many fewer oranges than strawberries are there?







There are _____ fewer oranges than strawberries.




19

24. Tick (✓) the correct box to complete the pattern.



Look at the pictures below and answer questions 25 and 26.

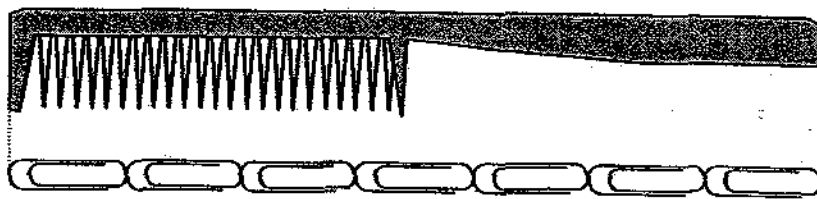
Set A	Set B	Set C
		

25. Set _____ has 5 more pens than Set C.

26. Set A has _____ fewer pens than Set B.


29
30

27.



The length of the comb is about _____ .

Look at the pictures below and answer questions 28 and 29.



28. There are _____ rectangles.

29. There are _____ more triangles than circles.


Look at the pictures below and answer questions 30a and 30b.



30. (a) Ribbon _____ is the shortest.

(b) Ribbon _____ is the longest.

Look at the pictures below and answer questions 31 and 32.




31. (a) _____ is the tallest.

(b) _____ is the shortest.

32. Bala is as tall as _____.

Look at the pictures below and answer questions 33 and 34.



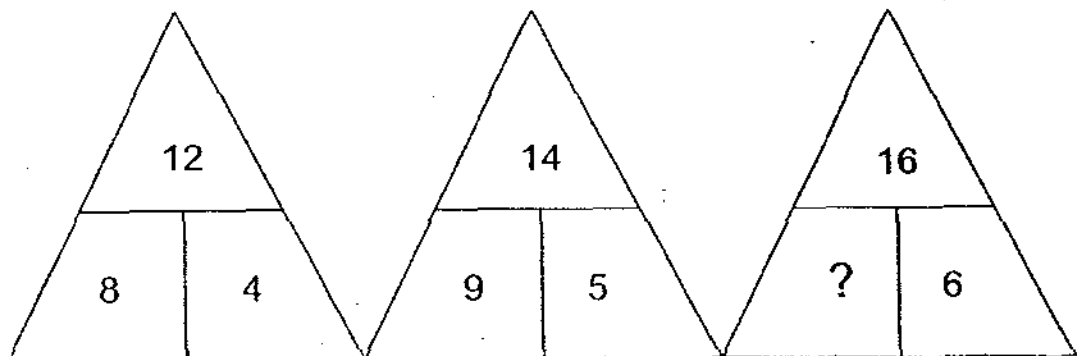
33. Circle the 7th chick from the left.

34. There are _____ chicks between the 2nd chick and the 9th chick.

35. There are 9 pigs and cows altogether on a farm.
If there are 2 pigs, how many more cows than pigs are there?

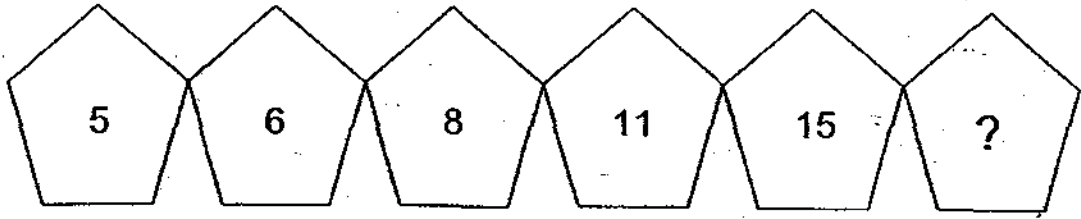
There are _____ more cows than pigs.

36. What is the missing number?




The missing number is _____.

37. What is the missing number?

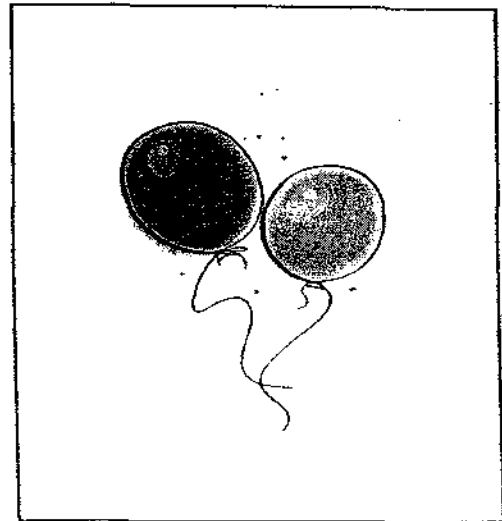


The missing number is _____.

38.



Suping



Tom

Suping has 8 balloons.

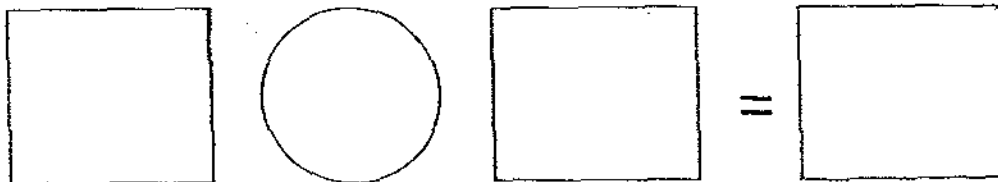

Tom has 2 balloons.

Suping must give _____ balloons to Tom so that both of them have the same number of balloons.

Section B (6 × 4 marks)

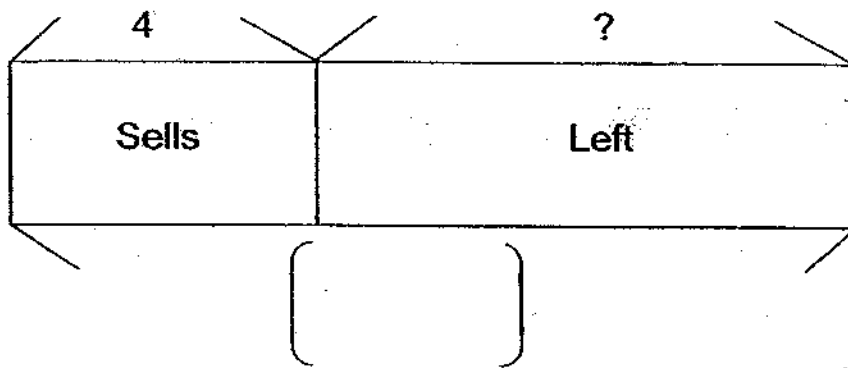
Work out the problem sums below. All working, statements and answers must be clearly shown.

39. Charlie has 18 apples.
He eats 7 apples.
How many apples are left?

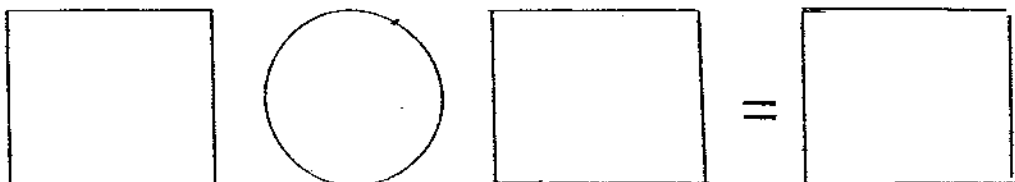


Charlie has _____ apples left.

40. Meng Teck bakes 13 pies.
 He sells 4 of the pies.
 How many pies has he left?
 (a) Complete the model.

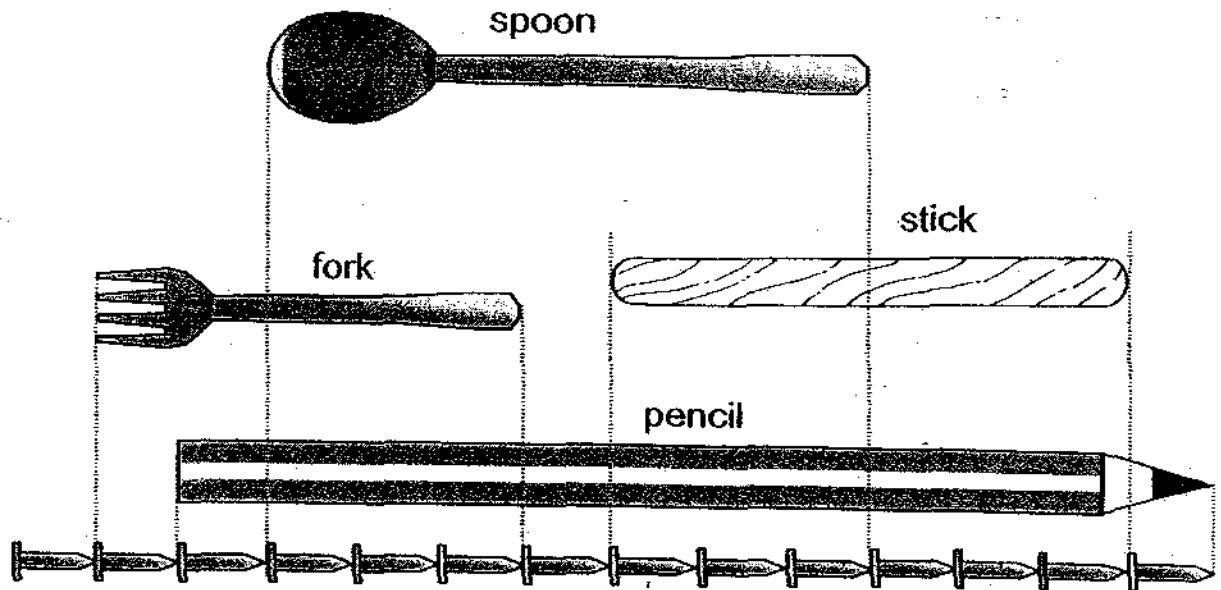


- (b) Write the number sentence.



Meng Teck has _____ pies left.

41.



(a) The _____ is longer than the spoon.

(b) The length of the spoon and stick is

_____  altogether.

(c) The _____ is shorter than the spoon but longer than the fork.

(d) Arrange the four items in order, from the longest to the shortest.

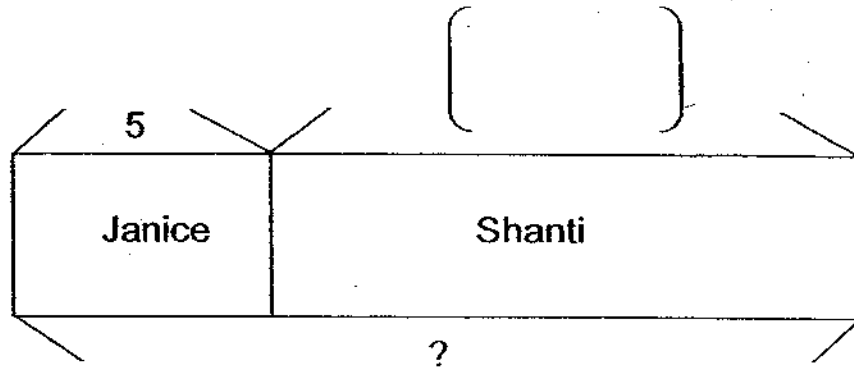
_____, _____, _____, _____
longest

42. Janice has 5 stickers.

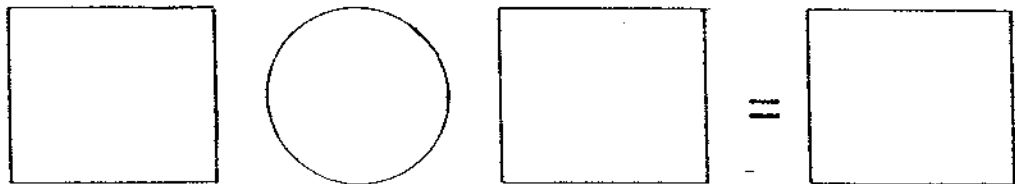
Shanti has 12 stickers.

How many stickers do they have altogether?

(a) Complete the model.

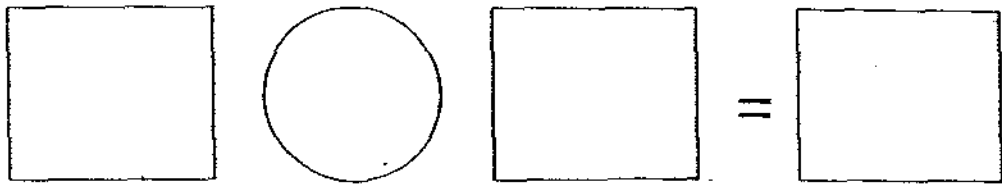


(b) Write the number sentence.



They have _____ stickers altogether.

43. Ben and Rita have 20 stamps altogether.
Ben has 8 stamps.
How many stamps does Rita have?



Rita has _____ stamps.

44. Ali has a packet of sweets.

He gives 8 sweets to his friend and has 6 sweets left.

How many sweets does Ali have at first?

Ali has _____ sweets at first.


End of Paper

Set by : Mrs Foo Ee Ling
Vetted by: P1 Maths Committee Teachers

EXAM PAPER 2009

**SCHOOL : PEI CHUN PRIMARY
SUBJECT : PRIMARY 1 MATHEMATICS**

TERM : SA1

- 1)9 2)16 3)nineteen 4)12 5)♡♡♡♡♡♡ 6)A 7)b
8)20,17,13,6,4 9)7,5 10)9+4, 19-8 11)5 12)18 13)6 14)5+9
15)B 16)Cow 17)tiger 18)20 19)13 20)14 21)9 22)18
23)4 24) 25)B 26)2 27)7 28)12 29)3 30)a)B b)A
31)a)Ahmad b)Jun Kang 32)Thomas 33)X X X X X X O X X 34)6
35)5 36)10 37)20 38)3

39)18-7=11
Charlie has 11 apples left.

40)a)13
b)13-4=9
Meng Teck has 9 pies left.

44)8+6=14
Ali has 14 sweets at first.

41)a)pencil
b)13
c)stick
d)pencil, spoon, stick, fork

42)a)12
b)5+12=17
They have 17 stickers altogether.

43)20-8=12
Rita has 12 stamp.