

Methodist Girls' School (Primary)
2009 End-of-Year Examination
Primary 1 Mathematics

Name : _____ ()

Class : Pr 1. _____

Date : 8th October 2009

Marks : _____ /100

Parent's Signature : _____

This booklet consists of 20 printed pages

Section A (6 x 1marks)

1. Count the number of coloured pencils and write the number in the box.




10




10




10




10




10



10



10









10



Go to page 2

2. Count the number of apples and write the number in the box.



Write the following numbers in words.

3. 5 tens 8 ones = _____

4. 2 tens 10 ones = _____

5. 43 ones = _____

6. 9 tens = _____

Go to page 3

Section B (38 x 2 m)

Fill in the missing numbers.

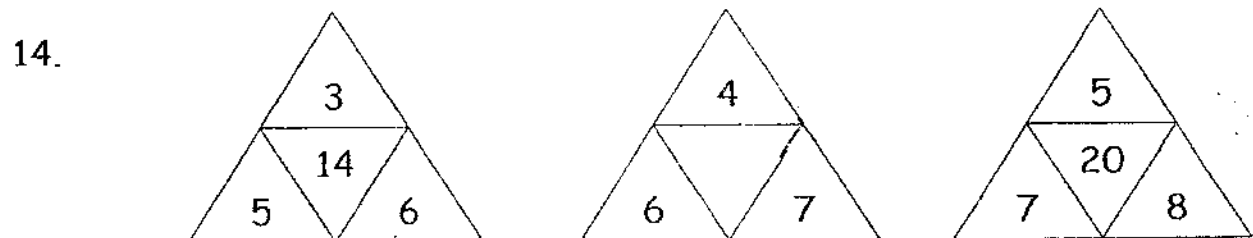
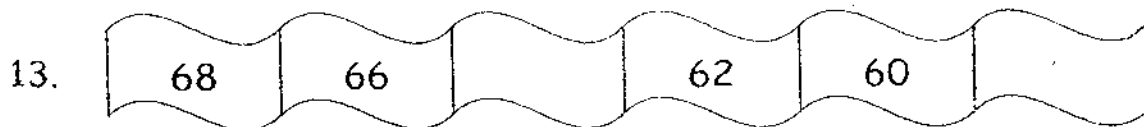
7. $54 - \underline{\hspace{2cm}} = 4$

8. $30 + 45 = \underline{\hspace{2cm}}$

9. $9 + 9 + 9 = \underline{\hspace{1cm}} \times \underline{\hspace{1cm}}$


10. 2 sixes = $\underline{\hspace{1cm}} \times \underline{\hspace{1cm}}$

11. 3 tens 6 ones = $\underline{\hspace{2cm}}$ ones



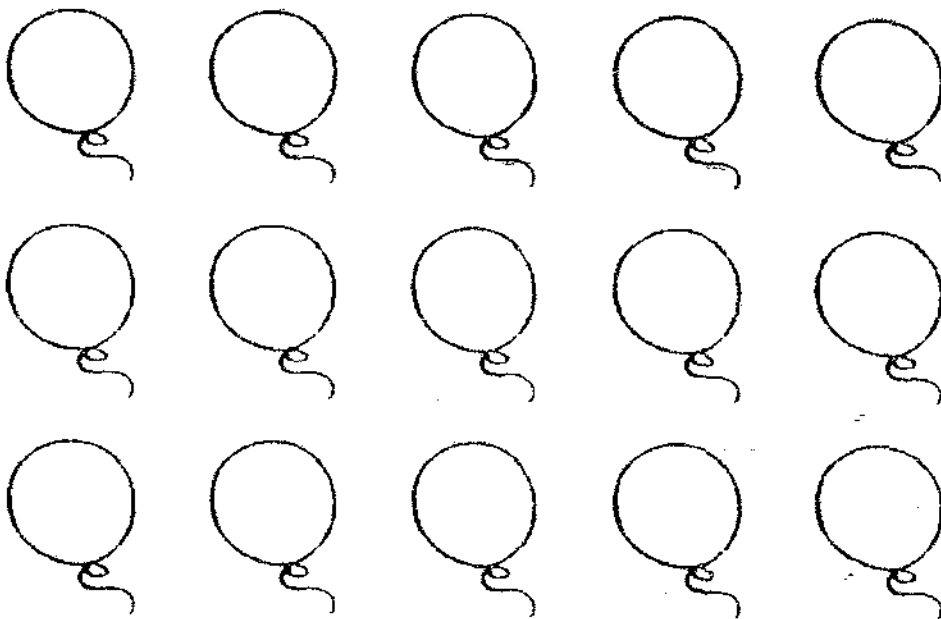
Go to page 4

15.



There are _____ groups of _____ chicks.

Use the following pictures to answer Question 16.

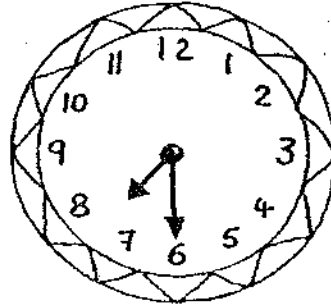


16. Bala, Mei Mei and Jane share the balloons equally.
Circle the balloons to show the number of balloons each child gets.

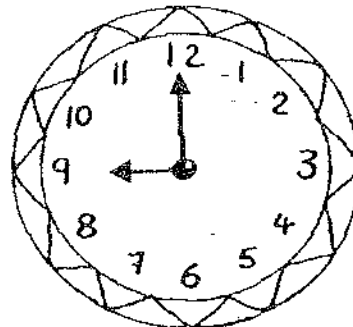
Each child gets _____ balloons.

Go to page 5

Write the time shown on the clock for Questions 17 and 18.



17. Danny and his parents have their breakfast at _____ every morning.

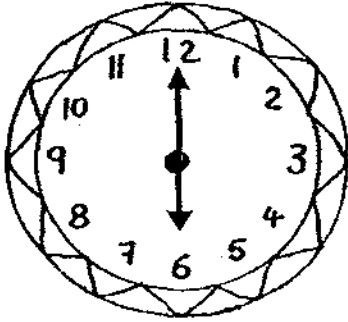


18. It started to rain at _____ in the evening.

Go to page 6

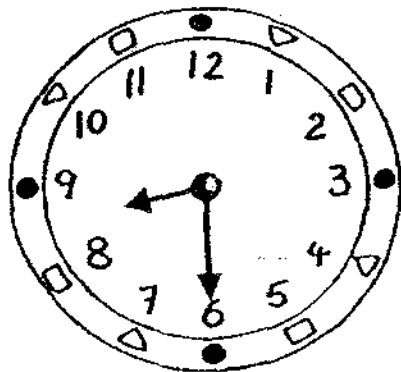
Tick (✓) the correct time for Question 19 and 20.

19.




half past 12	<input type="checkbox"/>
6 o'clock	<input type="checkbox"/>

20.



half past 8	<input type="checkbox"/>
half past 9	<input type="checkbox"/>

Go to page 7

Use  as 1 unit for Questions 21 to 23.



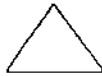
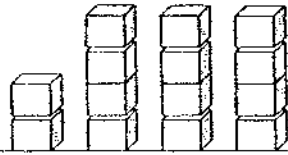
apple



21. The mass of the apple is _____ units.



watermelon



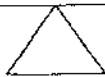
22. The mass of the water-melon is _____ units.



pear




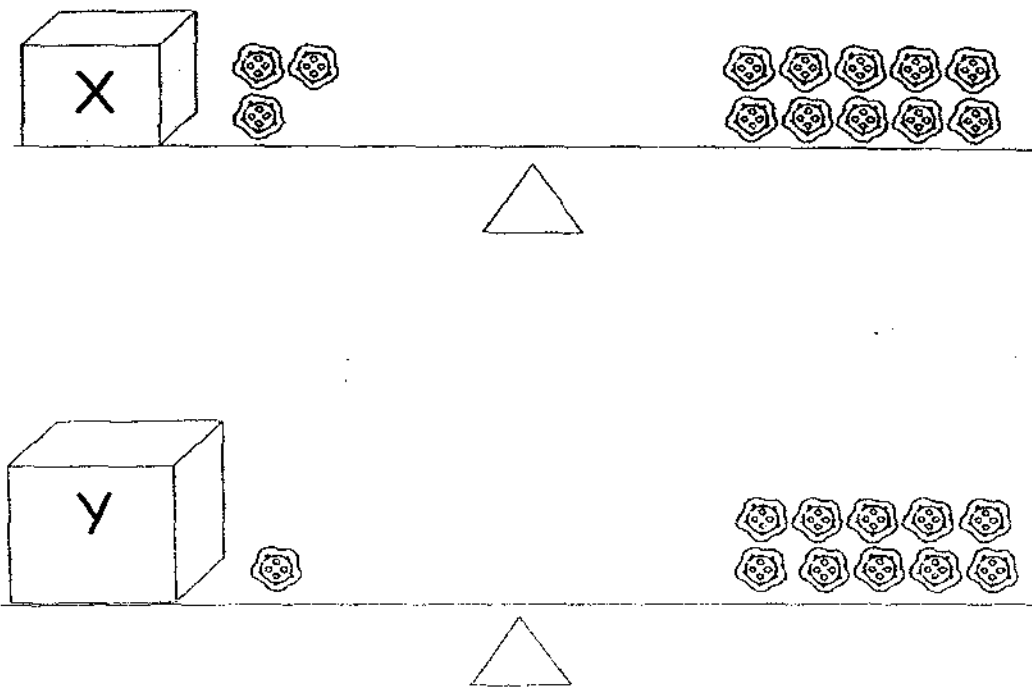
orange





23. The _____ is lighter than the _____

Go to page 8

Use the picture below to answer Question 24. Use  as 1 unit.



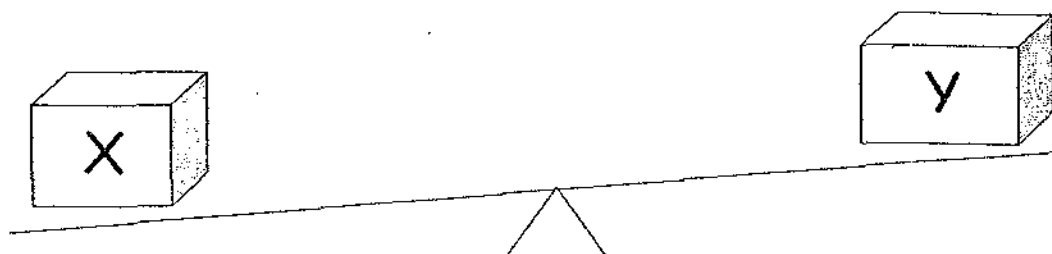
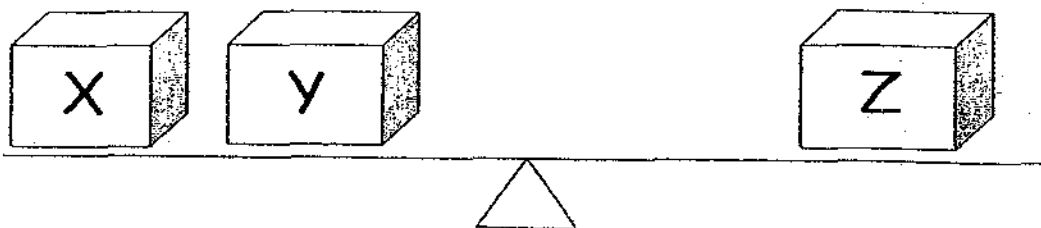
24 (a) The mass of Box X is _____ 

(b) The mass of Box Y is _____ 

|

Go to page 9

Use the pictures below to answer Question 25.



25. Arrange the boxes in order, beginning with the heaviest.

Box _____
heaviest

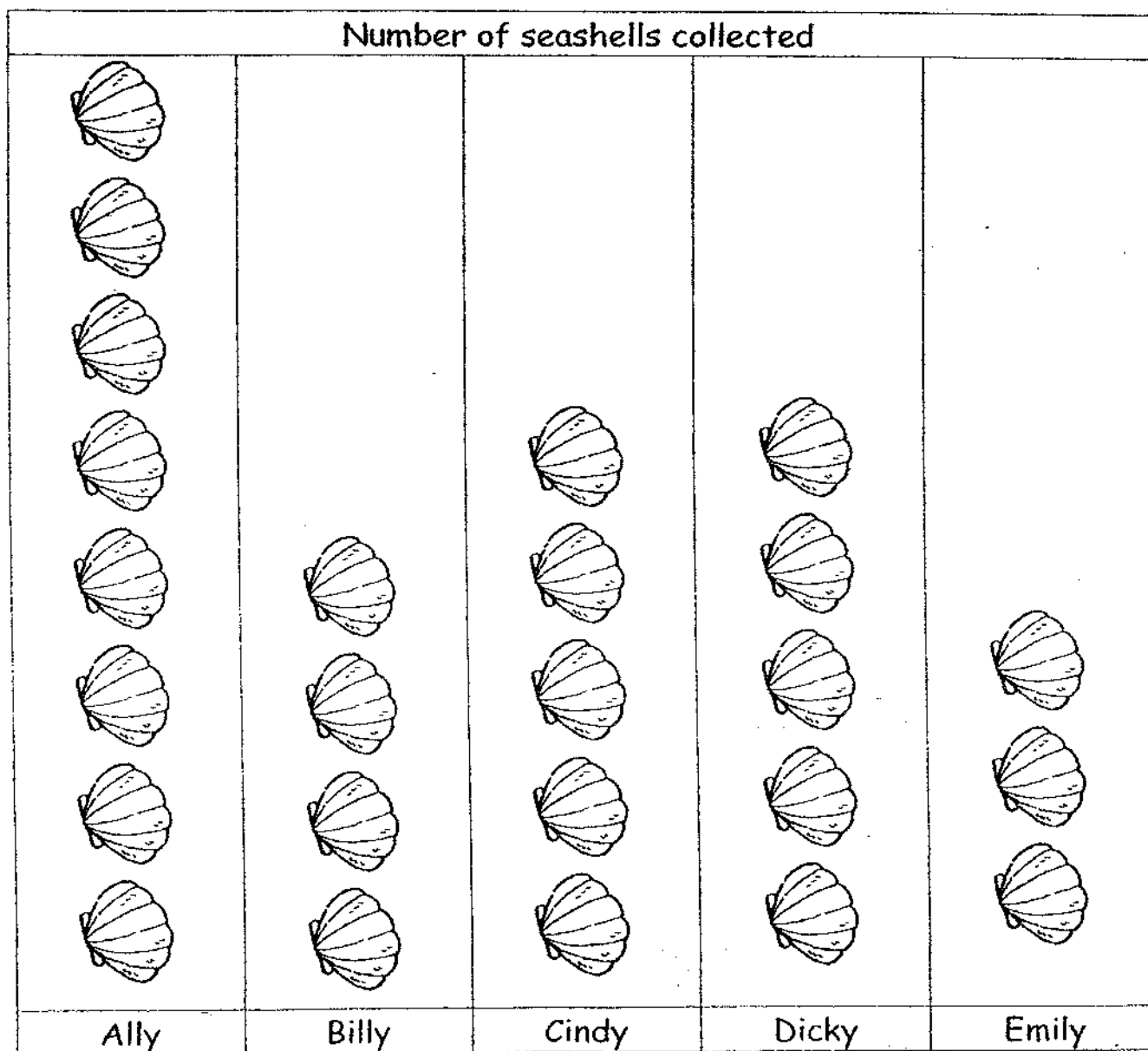
Box _____

Box _____

Go to page 10

The picture graph shows the number of the seashells collected by a group of friends. Use it to answer questions 26 to 30.

Use  as 1 unit.



Go to page 11

26. Ally has more seashells than Billy.

27. collected as many seashells as

28. Emily collected fewer seashells than
Cindy.

29. If Billy gives 1 seashell to Cindy, he will have the same number
of seashells as .


30. The children collected seashells
altogether.

Colour the correct amount of money for each of the following items.


31.




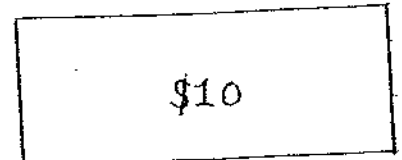
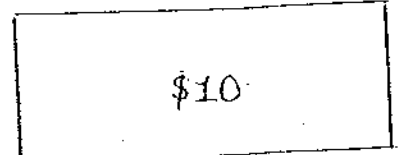
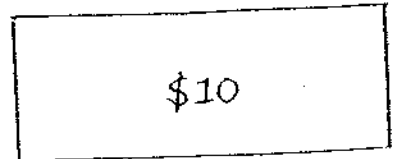



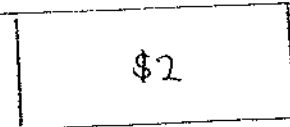
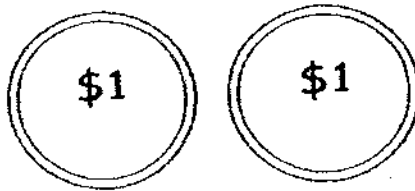
95¢



32.



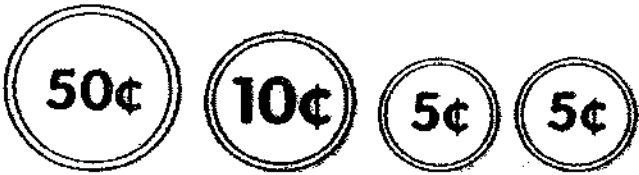
\$89



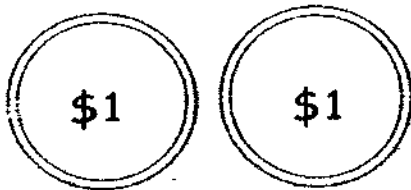
Go to page 13

Write down the amount of money for Questions 33 to 35.

33.



34.



35.



Go to page 14

Circle the correct answers for Questions 36 to 38.

36. Which sets are equal to 15?

$15 + 1$

$20 - 5$

1×5

$5 + 5 + 5$

37. Which sets are more than 20?

$4 + 16$

$15 + 7$

$25 - 7$

5×5

38. Which sets are less than 50?

4×4

$60 - 10$


$30 + 18$

$85 - 25$

Go to page 15

Fill in the missing numbers.

39. Circle the worms in groups of 4.



There are _____ groups of 4 worms.

40. $\star + \star + \star = 30$

$\heartsuit - \star = 66$

$\heartsuit = \underline{\hspace{2cm}}$

Go to page 16

Do the following sums in Questions 41 to 44.

41)

$$\begin{array}{r} 48 \\ + 21 \\ \hline \\ \hline \end{array}$$

42)

$$\begin{array}{r} 39 \\ + 54 \\ \hline \\ \hline \end{array}$$

43)

$$\begin{array}{r} 84 \\ - 31 \\ \hline \\ \hline \end{array}$$

44)

$$\begin{array}{r} 73 \\ - 26 \\ \hline \\ \hline \end{array}$$

Go to page 17

Section C (6 x 3 marks)

Do the story sums.

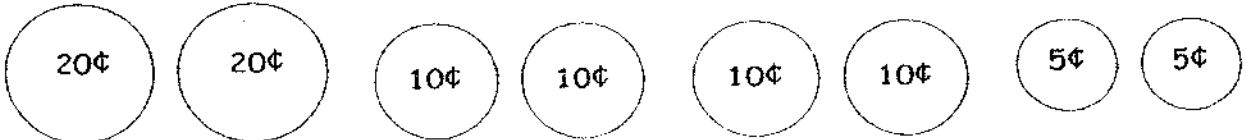
45. Meiling has this amount of money.


Nora has \$12 more than Meiling.
How much money does Nora have?

$$\$ \square \bigcirc \$ \square = \$ \square$$

Nora has \$ _____.

46. Bala had this amount of money.



He spent 65 ¢ on a pear. 
How much money had he left?

$$\square \text{ ¢ } \bigcirc \square \text{ ¢ } = \square \text{ ¢ }$$

Bala had _____ ¢ left.

Go to page 18

47. There were 5 children at a party.
The clown gave 3 balloons to each child.
How many balloons did the clown give away at the party?



$$\square \circ \square = \square$$

The clown gave away _____ balloons at the party.


48. Chef Wong bought a bag of potatoes.
He used 32 potatoes, threw away 7 potatoes that were rotten and
still had 23 potatoes left.
How many potatoes did Chef Wong buy at first?

$$\square \circ \square \circ \square = \square$$

Chef Wong bought _____ potatoes at first.

Go to page 19

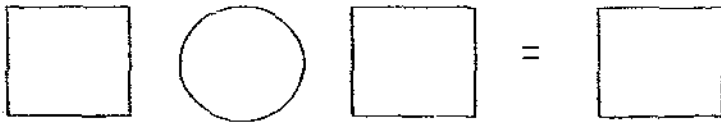
49. Pam bakes 80 gingerbread men.
She puts 10 gingerbread men in each jar.
How many jars does Pam need?
Circle to show the answer.



Pam needs _____ jars.

Go to page 20

50. Mrs Bala baked 75 cupcakes for a party.
Some cupcakes were eaten and 19 cupcakes were left.
How many cupcakes were eaten during the party?


$$\square - \bigcirc = \square$$

_____ cupcakes were eaten during the party.

- The End -

Please Check Your Work Carefully

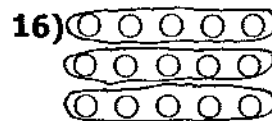
EXAM PAPER 2009

**SCHOOL : MGS PRIMARY
SUBJECT : PRIMARY 1 MATHEMATICS**

TERM : SA2

- 1)83 2)46 3)fifty-eight 4)thirty 5)forty-three 6)ninety
7)50 8)75 9)3x9 10)2x6 11)36 12)84,93 13)64, 58 14)17


15)There are 3 groups of 4 chicks.



Each child gets 5 balloons.

- 17)half past 7 18)9 o'clock 19)6 o'clock 20)half past 8 21)3
22)12 units 23)orange , pear 24)a)7 b)9 25)Box Z, Box X, Box Y
26)4 27)Dicky, Cindy 28)2 29)Emily 30)25 31)50¢,20¢,5¢,20¢
32)\$2,\$2,\$5,\$10,\$10,\$10,\$50 33)70¢ 34)\$12 35)\$68

- 36)20-5, 5+5+5 37)15+7, 5x5 38)4x4, 30+18



There are 8 groups of 4 worms.

- 40)76 41)69 42)93 43)53 44)47

45)\$67+\$12=79
Nora has \$79

46)90¢ - 65¢=25¢
Bala had 25¢ left

47)5x3=15
The clown gave away 15 balloons at the party.

48)32+7+23=62
Chef Wong bought 62 potatoes at first.

50)75-19=56
56 cupcakes were eaten during the party.

49)Pam needs 8 jars.