



Maha Bodhi School
Mathematics
2009 Semestral Assessment 2

Name : _____ ()

Class : Pr 1 _____

Duration : 1 h 30 min

Date : 28 October 2009

Parent's Signature : _____

Section A (80 marks)	
Section B (20 marks)	
Total (100 marks)	

Section A (80 marks)

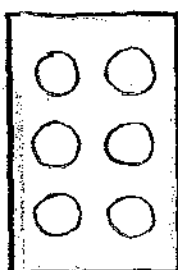
Questions 1 to 40 carry 2 marks each.

1. Count the number of balloons and write the number in words.

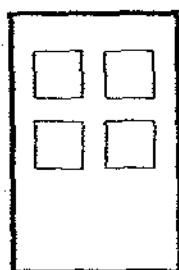


There are _____ balloons.

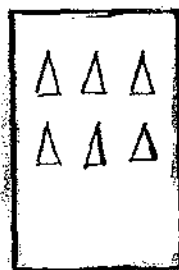
2. The picture shows a set of cards with different shapes.
Colour the cards which have the same number of shapes.




A



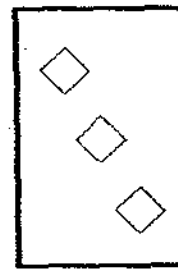
B



C



D




E

3. What is the shape shown below? Write the shape in words.




It is a _____

4. Cross out the fifth ball from the right.



5. Count and write the number of bees in the box.



6. $20 - 7 =$ _____

7. $79 =$ _____ tens _____ ones

8. Which number is the greatest? Circle it.

29	33	28	37	19
----	----	----	----	----

9. Write the amount of money in numbers.

A	One hundred dollars	
B	Twenty cents	


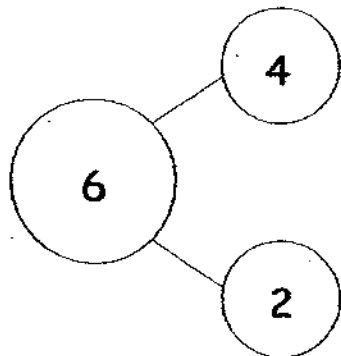
10. One 50¢ coin = _____ 5¢ coins

11. $4 + \underline{\hspace{2cm}} = 10$

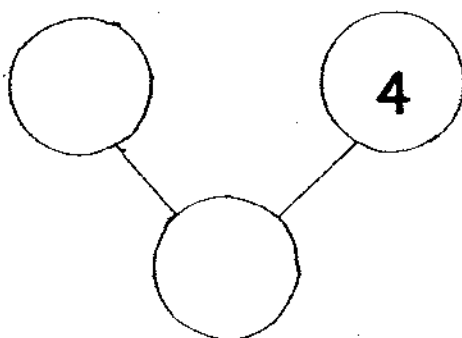

12. Complete the number pattern below.

80 , 70 , _____ , 50 , _____ , 30


13. Draw a line to divide the set into two parts to show the number bond given.

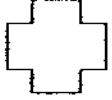




14. Study the picture and complete the number bond.





15. Which is the missing shape? Tick your answer in the correct box.




A		
B		
C		

16. The animals line up to buy lemonade.
If the pig leaves the queue, which position will the cat be in?




The cat will be in the _____ position.

17. Arrange the numbers in order. Begin with the smallest.



18. Write down your answers in the boxes.

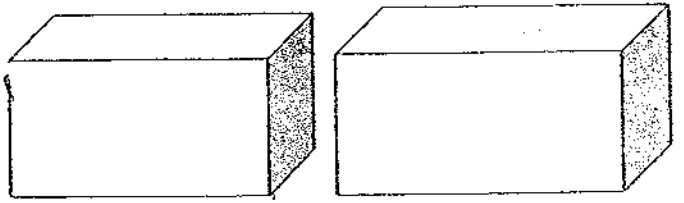


19. Amanda has 4 dogs. Each dog has 4 legs.




The dogs have _____ legs altogether.


20. Tim puts some bugs in 2 boxes.
Each box has 7 bugs in it.
How many bugs are there altogether?



There are _____ bugs altogether.

21. Look at the picture of the tapes below and fill in the blank.

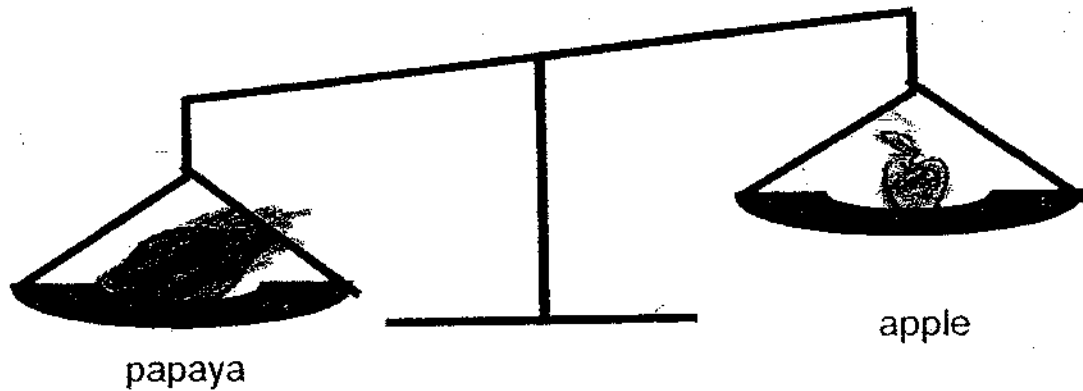


Each  stands for 1 unit.

The total length of the longest tape and the shortest tape is _____ units.

22. 26 is 10 less than _____

23. Write heavier or lighter in the blank.





The apple is _____ than the papaya.



24. There are 20 stars. Circle the stars in groups of 4.



There are _____ groups of 4.

25. There are 15  altogether.


Draw an equal number of  in each box.




26. Ah Kow went for his tuition at half past 4.

Which clock shows the correct time?

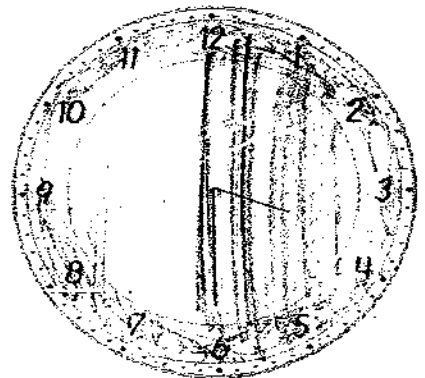
Colour the correct clock face.




A



B



The picture graph below shows the favourite ice-cream of some pupils. Study it carefully and answer questions 27 to 29.



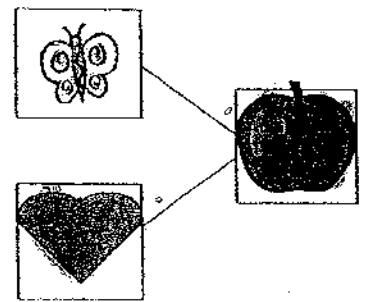
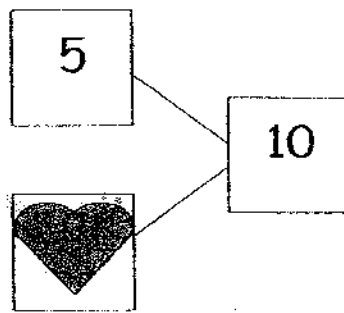
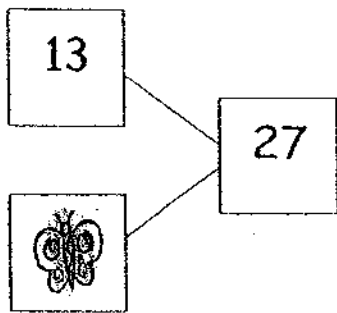
Each  stands for 1 pupil.


27. The most popular ice-cream is the _____ ice-cream.
28. _____ more pupils like chocolate ice-cream than orange ice-cream.
29. The total number of pupils who like vanilla and mango ice-cream is the same as the number of pupils who like _____ ice-cream.

30. Write your answers in the boxes provided.


$$\begin{array}{r} 6 \quad 4 \\ + \quad 2 \quad \square \\ \hline \square \quad 9 \end{array}$$

31. Study the number bonds.

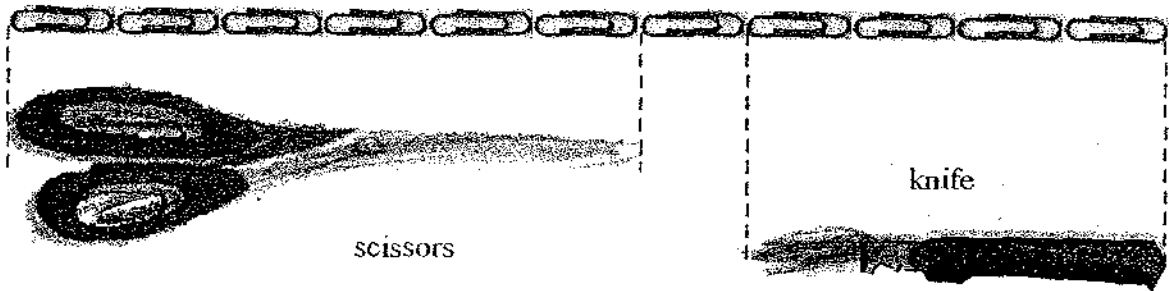



The  stands for the number _____

32. Using a ruler, draw 2 lines in the square to make 1 rectangle and 2 triangles.



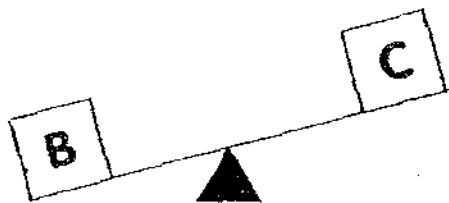
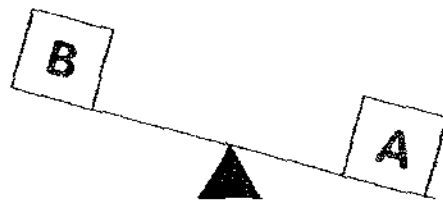
33. Look at the picture below.



Each  stands for 1 unit.

The total length of 3 similar scissors and a knife is _____ units.

34. Study the diagrams below carefully.
Arrange the letters in order. Begin with the lightest.




, ,

35. Fill in the missing numbers in the boxes.

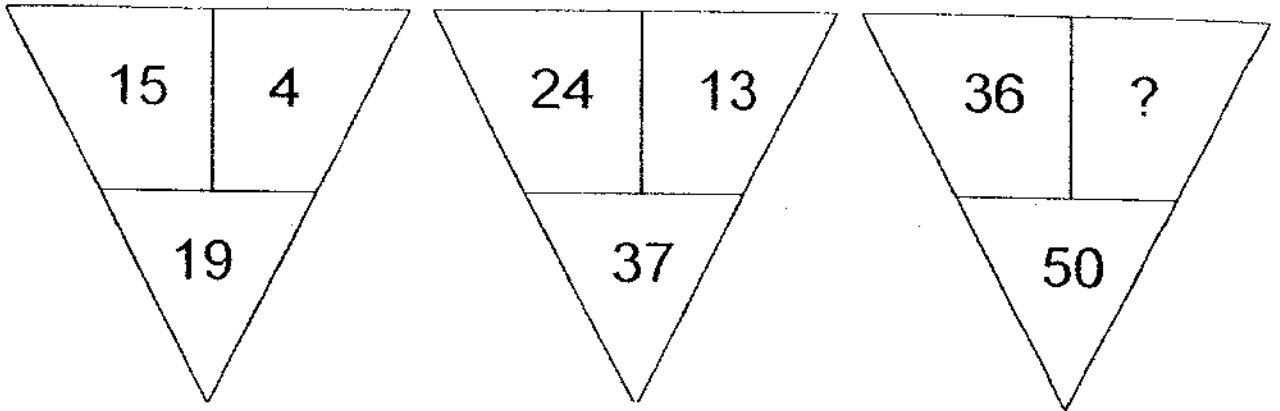
$$\begin{array}{r} 3 \quad \square \\ - \quad \square \quad 6 \\ \hline 1 \quad 4 \\ \hline \end{array}$$

36. The greatest two digit number is _____

37. Ravi wakes up at 6 o'clock every day.
Using a ruler, draw the hands of the clock to show the time Ravi wakes up.

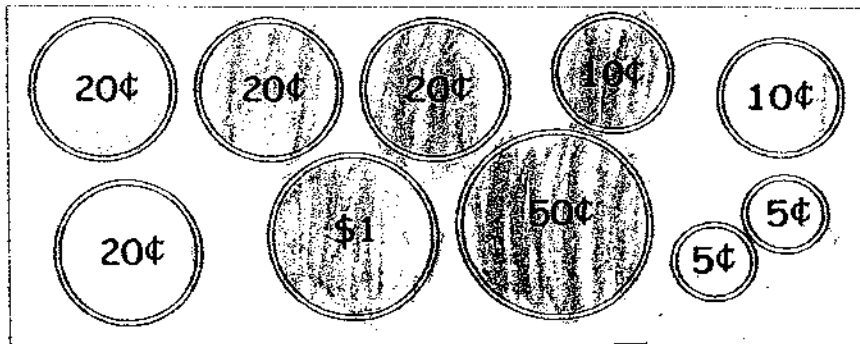


38. What is the missing number?




The missing number is _____

39. I have five coins.
They make up \$2.
Shade the coins that I have.



40. Tom has 4 cards now. He buys 3 cards every day.
How many days does he take to collect 18 cards altogether?



He takes 19 days to collect ~~18~~ cards.

Section B (20 marks)

Questions 41 to 45 carry 4 marks each. Fill in the blanks and the statements carefully.

41. Mrs Tan gave 16 cookies to her two children.
She gave 9 cookies to her daughter.
How many cookies did she give to her son?



$$\square \ominus \square = \square$$

She gave _____ cookies to her son .


42. John has 8 bookmarks
He has 5 bookmarks less than Sam.
How many bookmarks does Sam have?



$$\square \ominus \square = \square$$

Sam has _____ bookmarks.


43. Mr Chew had some apples.
 He gave 10 apples to some pupils in Class 2A.
 He gave 14 apples to some pupils in Class 1K.
 He had 11 apples left.
 How many apples did he have at first?



$$\square \ominus \square \ominus \square = \square$$

He had _____ apples at first.

44. Sarah bought 5 trays of eggs.
 There were 10 eggs in each tray.
 How many eggs did she buy altogether?



$$\square \times \square = \square$$

She bought _____ eggs altogether.

45. Jane has 18 flowers.
She puts them equally into 3 vases.
How many flowers are there in each vase?
Draw to show the flowers in the vases.



There are _____ flowers in each vase.



Remember to check your work!
Every mark counts.

End of paper

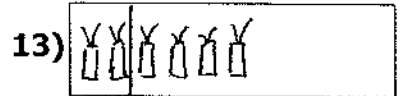
EXAM PAPER 2009

**SCHOOL : MAHA BODHI PRIMARY
SUBJECT : PRIMARY 1 MATHEMATICS**

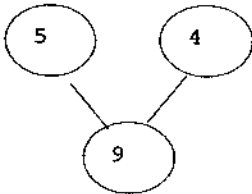
TERM : SA2

1)three 2)A,C 3)triangle 4)0 X 0 0 0 0 5)16 6)13 7)7 tens 9 ones

8)37 9)A)\$100 B)20¢ 10)10 11)6 12)60,40




14) 15)B 16)3rd 17)12,13,16,19



18)12,14 19)16 20)14 21)10 22)36

23)lighter 24)5 25)

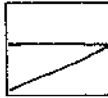


26)B 27)chocolate 28)7 29)strawberry

30)64+25=89

31)19

32)



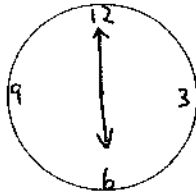
33)22

34)C,B,A

35)30-16=14

36)99

37)



38)14

39)\$1, 50¢, 20¢, 20¢, 10¢ 40)5

41)16-9=7

She gave 7 cookies to her son.

42)8+5=13


Sam has 13 bookmarks .

43)10+14+11=35

He had 35 apples at first.

44)5x10=50

She bought 50 eggs altogether.



There are 6 flowers in each vase.