



Pei Hwa Presbyterian Primary School
Second Semestral Assessment – 2009
Mathematics
Primary 1
(Time: 1 hour 30 min)

Total	
	100

Name: _____ ()

Class: _____ (1)

Date: _____

Parent's Signature: _____

Section A : (10 x 2 = 20 marks) Multiple Choice Questions

Choose the correct answer and write its number(1,2,3 or 4) in the brackets provided.

1) ★ ★ ★ ★ ★

There are _____ stars.

(1) 5

(2) 6

(3) 7

(4) 8

()

2) $7 + 2 =$ _____

(1) 5

(2) 6

(3) 8

(4) 9

()

14

3) 35 = _____

(1) 2 tens 5 ones

(2) 3 tens 3 ones

(3) 3 tens 5 ones

(4) 5 tens 3 ones

()

4) 43 is _____ less than 93.

(1) 20

(2) 30

(3) 40

(4) 50

()

5) What number comes before 98?

(1) 100

(2) 99

(3) 97

(4) 96

()

6) Fill in the missing numbers.

54 , _____ , 62 , 66 , _____

(1) 50 , 64


(2) 52 , 64

(3) 56 , 68

(4) 58 , 70

()

7) Jason has 10 envelopes. He shares them equally with his brother.
How many envelopes will he get?



(1) 1

(2) 2

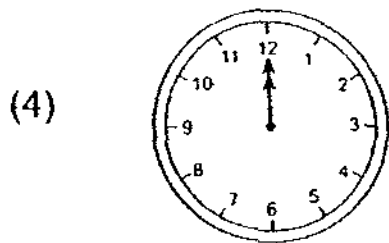
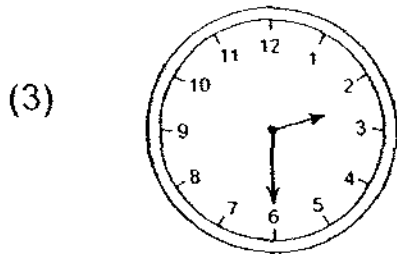
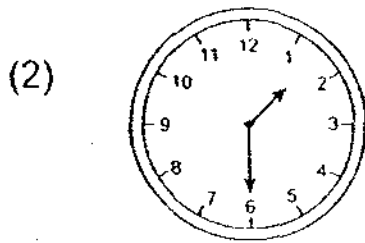
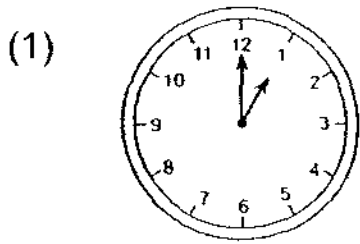
(3) 5

(4) 10

()


14

8) Peter has his lunch at half past 1 everyday. Which of the following clock shows the correct time at which he has his lunch?



()

9) 4 groups of 3 is the same as _____.



- (1) $3 + 3 + 3 + 3$
- (2) $4 + 4 + 4 + 4$
- (3) $3 \times 3 \times 3 \times 3$
- (4) $4 \times 4 \times 4 \times 4$

()

10) Tim wants to buy an ice-cream.

He has \$0.20.

He needs _____ more.



- (1) \$0.60
- (2) \$0.80
- (3) \$1.00
- (4) \$1.80

()


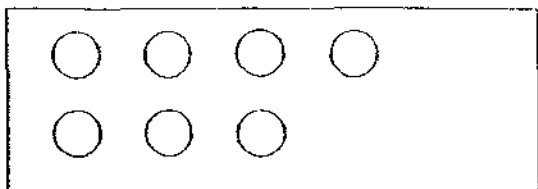
14

Section B : (26 x 2 = 52marks)

Write your answers in the blanks provided.

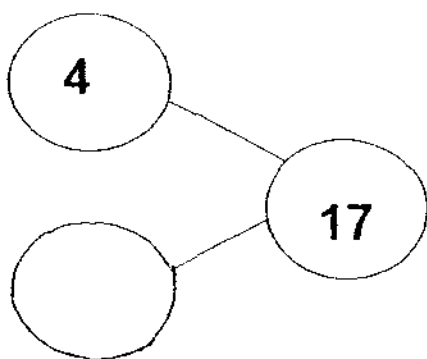
Show your working clearly in the space provided below each question.

11)



There are _____ fewer star(s) than circles.

12) Fill in the missing number.

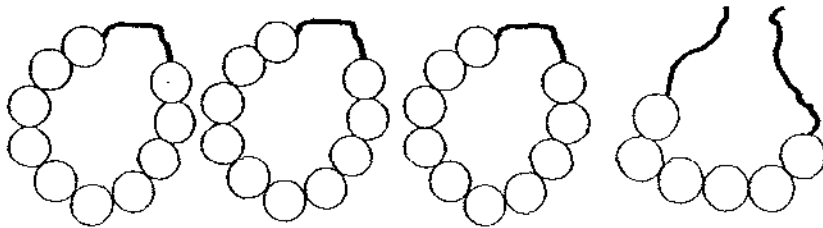


13) Count and write the correct number in the blank.



Answer : _____

14) Count and write the total number of beads in words.



15) 6 more than 80 is _____

16) 4 more than twelve is _____.

17) $34 + \underline{\hspace{2cm}} = 35 + 35$

21) Which 2 numbers add up to 93?
 Colour the boxes.

32

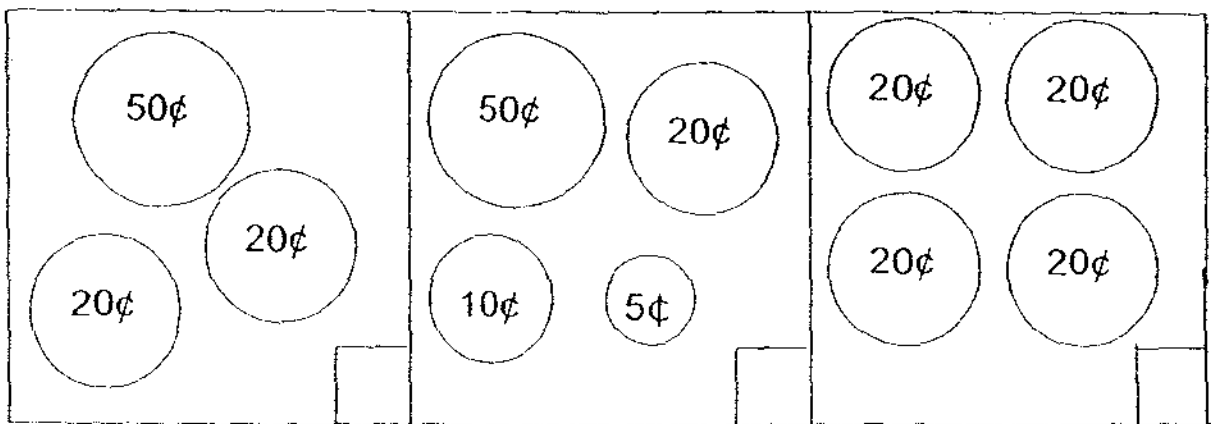
35

45

38

55

22) Tick the set that has the least money.



23) Circle the sets that have the same value.

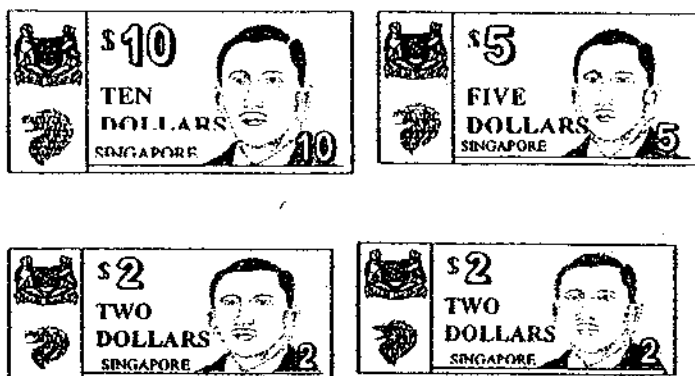
10 fours

3 tens 13 ones

$50 - 7$

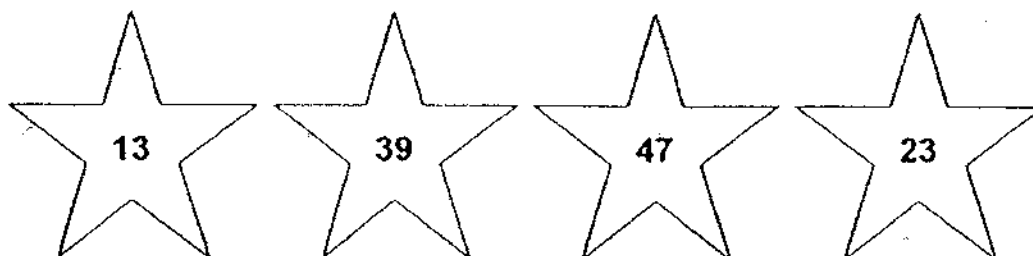
$30 + 4$

24) Ali paid this amount of money for a toy car.



The toy car cost \$ _____


25) Look at the numbers below.



Arrange the numbers from the greatest to the smallest.

_____ , _____ , _____ , _____
Greatest


The picture below shows 18 pies. Use it to answer questions 26 and 27.



26) The pies can be grouped into _____ groups of 3.

27) The pies can also be grouped into 2 groups of _____.

28)



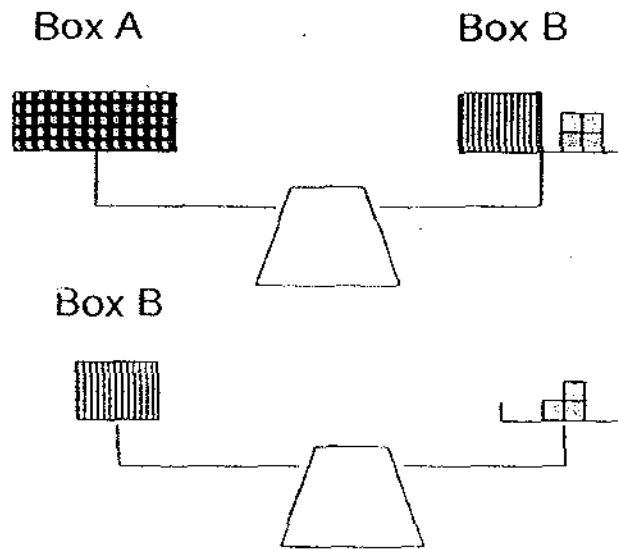
A cartoon started at the time shown above and ended 1 hour later.
What time did the cartoon end?

Answer : _____ o'clock

29) Write the missing numbers in the box.

$$\begin{array}{r}
 43 \\
 + 3\boxed{} \\
 \hline
 \boxed{}1
 \end{array}$$

30)

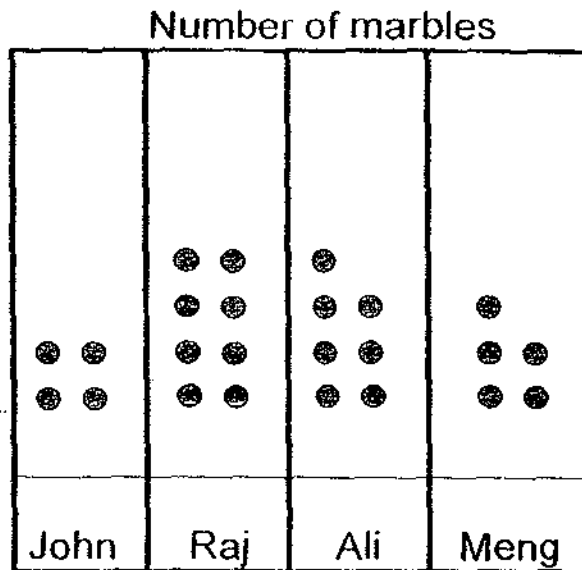


Use \square as 1 unit.

The mass of Box A is _____ units.

Use the graph below to answer questions 31 and 32.

The graph shows the number of marbles each boy have.



Each ● stands for 1 marble.

31) Meng has _____ marbles.

32) _____ and _____ have 15 marbles.

33) I am a number which is greater than 11 but smaller than 17.

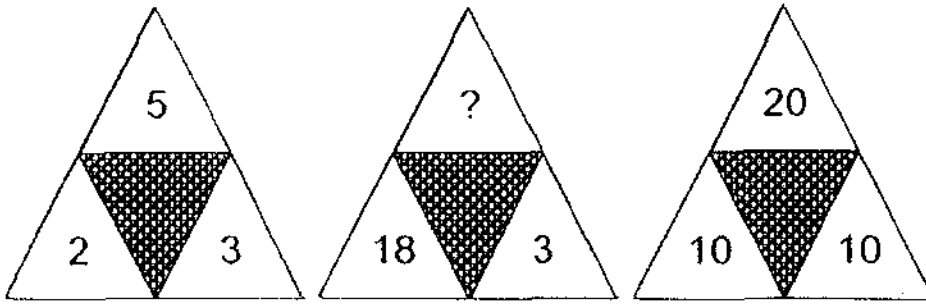
My ones digit is twice my tens digit.

What number am I ?

Answer . _____

16

34) Fill in the missing number.



Answer : _____

35) There are 10 marbles in a box.

There are 2 more blue marbles than red marbles.

Two marbles are yellow.


How many blue marbles are there?

Answer : _____

36)  +  +  = 11

 +  = 6

 +  = 7

 = _____

16

Section C (7 x 4 = 28 marks)

Show your working clearly in the space provided below each question.

37) There are 14 flowers.

There are 20 vases.

How many more vases than flowers are there?

$$\square \quad \bigcirc \quad \square \quad = \quad \square$$

There are _____ more vases than flowers.

38) Mrs Lee baked 35 cookies.

Her children ate 17 cookies.

How many cookies were left?

$$\square \quad \bigcirc \quad \square \quad = \quad \square$$

There were _____ cookies left.

Working


$\frac{\quad}{18}$

39) Jane gave away 44 stickers.
She had 56 stickers left.
How many stickers did she have at first?

$$\square \quad \circ \quad \square \quad = \quad \square$$

She had _____ stickers at first.

40) Liming has ~~6~~⁵ plates. He puts ~~6~~⁶ cookies on each plate.
How many cookies are there altogether?



$$\square \quad \circ \quad \square \quad = \quad \square$$

There are _____ cookies altogether.

41) Mr Tan sells 3 baskets of oranges a day.





How many baskets of oranges can he sell in a week ?

Working



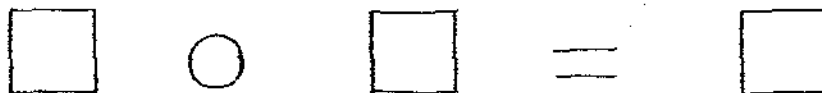
He can sell _____ oranges in a week.

42)

<div data-bbox="320 958 419 1032" style="border: 1px solid black; padding: 2px; display: inline-block;">\$20</div>	<div data-bbox="576 958 697 1032" style="border: 1px solid black; padding: 2px; display: inline-block;">\$26</div>	<div data-bbox="927 958 1026 1032" style="border: 1px solid black; padding: 2px; display: inline-block;">\$36</div>	<div data-bbox="1230 958 1329 1032" style="border: 1px solid black; padding: 2px; display: inline-block;">\$12</div>
			
pen	pair of scissors	mouse	dustbin

Rani spent \$62 on 2 items.

What did she buy?



She bought a _____ and a _____

EXAM PAPER 2009

SCHOOL : PEI HWA PRIMARY
SUBJECT : PRIMARY 1 MATHEMATICS

TERM : SA2

Q1	Q2	Q3	Q4	Q5	Q6	Q7	Q8	Q9	Q10	Q11	Q12	Q13
2	4	3	4	3	4	3	2	1	1	2	13	19

14)thirty-six 15)86 16)16 17)36 18)Circle

19)book

The book is 3rd from the right

20)4 21)38,55 22)20¢,20¢,20¢,20¢ 23)3 tens 13 ones, 5-7 24)\$19

25)47,39,23,13 26)6 27)9 28)9o'clock 29)43+38=81 30)7 units

31)5 32)Raj and Ali 33)12 34)21 35)5 36)2

37)20-14=6

There are 6 more vases than flowers.

38)35-17=18

There were 18 cookies left.

39)44+56=100

She had 100 stickers at first.

40)5x6=30

There are 30 cookies altogether.

41)7x3=21

He can sell 21 oranges in a week.

42)\$26+\$36=\$62

She bought a mouse and a pair of scissors.

43)5