

METHODIST GIRLS' SCHOOL (Primary)  
2009 Mid-Year Examination  
Primary 3

# MATHEMATICS

Name: \_\_\_\_\_ ( )

Class: P 3. \_\_\_\_\_

Total time for Sections A, B and C: 1h 45min

---

Do not turn over this page until you are told to do so.

Follow all instructions carefully.

Answer all questions.

Marks Obtained:

Section A (40)	
Section B (40)	
Section C (20)	
Total: (100)-	

This booklet consists of 16 printed pages.

**Section A** (20 x 2 marks)

For each of the following questions, four options are given.

Choose the correct answer and shade its number in the Optical Answer Sheet (OAS) provided.

1. What is the missing number in the blank?

$$8\ 180 = 8\ 000 + \underline{\hspace{2cm}}$$

- (1) 18  
 (2) 80  
 (3) 100  
 (4) 180

2. In 7 632, the digit 3 has the same value as \_\_\_\_\_.

- (1)  $3 \times 1$   
 (2)  $3 \times 10$   
 (3)  $3 \times 100$   
 (4)  $3 \times 1000$

3. Which of the following is 100 more than the sum of 438 and 123?

- (1) 461  
 (2) 551  
 (3) 561  
 (4) 661

4. Which of the following is the smallest even number with 6 in the hundreds place?

- (1) 467  
 (2) 468  
 (3) 607  
 (4) 608

Go to page 3

5. What is the remainder when 735 is divided by 8?

- (1) 7
- (2) 6
- (3) 5
- (4) 4

6. What is the difference between 65 hundreds and 30 tens?

- (1) 350
- (2) 620
- (3) 6 200
- (4) 6 470

7. The product of two numbers is 395. If one of the numbers is 5, what is the other number?

- (1) 65
- (2) 69
- (3) 75
- (4) 79

8.  $489 \div 3 = 160 + \boxed{\text{shaded box}}$

What is the missing number in the box?

- (1) 1
- (2) 2
- (3) 3
- (4) 4

Go to page 4

9. What is the missing number in the number pattern?

5 734, 5 524, \_\_\_\_\_, 5 104, 4 894

- (1) 5 314
- (2) 5 334
- (3) 5 374
- (4) 5 394

10. If  $\triangle \times \diamond = 729$

and  $\diamond \times \diamond = 81$ , then  $\triangle =$  \_\_\_\_\_

- (1) 9
- (2) 27
- (3) 81
- (4) 243

11. Mother had 66 apples. She gave 21 apples to her friend and shared the remaining apples equally among her 3 children. How many apples did each child receive?

- (1) 7
- (2) 15
- (3) 22
- (4) 45

Go to page 5

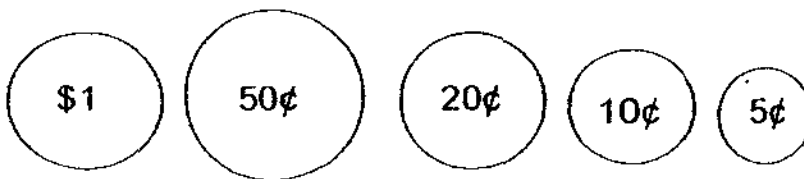
12. Study the table. What is the sum of A and B?

22	44	A	176
23	B	92	184
45	90	180	360

- (1) 112  
 (2) 124  
 (3) 134  
 (4) 144
13. Baker Lee had 372 eggs. He used 6 eggs to bake each cake. How many cakes did he bake?

- (1) 59  
 (2) 62  
 (3) 74  
 (4) 87

14. A shopkeeper has coins in the following denominations in his cash register.



Raju bought a note book for \$2.25. He gave the shopkeeper \$4. What is the least number of coins he could receive as change?

- (1) 5  
 (2) 6  
 (3) 3  
 (4) 4

15. Mrs Lim bought 2 cups of tea and 1 cup of Milo.  
A cup of Milo cost 20 cents more than a cup of tea.  
How much did Mrs Lim pay if each cup of Milo cost \$1.50?

- (1) \$1.30  
 (2) \$2.60  
 (3) \$2.80  
 (4) \$4.10

16. The table below shows the points awarded for the different positions during the school swim meet.

1 <sup>st</sup> position	9 points
2 <sup>nd</sup> position	7 points
3 <sup>rd</sup> position	5 points

Mei Mei took part in 3 events and scored a total of 19 points.  
What could her positions have been?

- (1) 1<sup>st</sup>, 2<sup>nd</sup>, 3<sup>rd</sup>  
 (2) 1<sup>st</sup>, 3<sup>rd</sup>, 3<sup>rd</sup>  
 (3) 2<sup>nd</sup>, 3<sup>rd</sup>, 3<sup>rd</sup>  
 (4) 2<sup>nd</sup>, 2<sup>nd</sup>, 2<sup>nd</sup>

17. Which of the following can be divided by 5 without any remainder?

- (1) 356  
 (2) 365  
 (3) 536  
 (4) 563

Go to page 7

18.  $\heartsuit + \heartsuit + \spadesuit = 16$   
 $\spadesuit + \heartsuit = 11$   
 $\heartsuit + \heartsuit = ?$

- (1) 5
- (2) 10
- (3) 12
- (4) 14

19. Lily has 95 more Singapore stamps than Malaysian stamps. If she has 386 Malaysian stamps, how many stamps does she have altogether?

- (1) 471
- (2) 481
- (3) 767
- (4) 867

20. A van can carry 7 passengers. What is the minimum number of vans needed for 59 people?

- (1) 7
- (2) 8
- (3) 9
- (4) 10

**Section B** (20 x 2 marks)

For each of the following questions, write your answers in the boxes provided. Give your answers in the units stated.

Show your working clearly.

21.  $6 + 6 + 6 + 6 + 6 + 6 = \boxed{\phantom{000}} \times 6 - 12$

What is the missing number in the box?

22. Write 2 893 in words.


---



---

23. 5 437 is 300 more than \_\_\_\_\_

24. Using all the digits given, what is the greatest 4-digit **odd** number that can be formed?

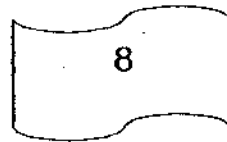
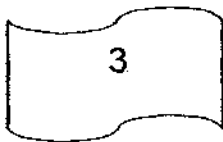



Go to page 9

25. What is the missing number in the box?

$$\begin{array}{r}
 8408 \\
 - 46\boxed{\phantom{0}}9 \\
 \hline
 3769
 \end{array}$$

26. What is the maximum number of 3-digit numbers that can be formed from the 3 numbers shown below?




27. There are some animals in a farm. 4 are cats and the rest are chickens. If these animals have 60 legs altogether, how many chickens are there?

28. The value of the digit 4 in 461 is \_\_\_\_\_ times the value of the digit 4 in 1254.

Go to page 10

29. There are 168 people queuing to watch a movie. If there are 25 rows of 8 seats in the cinema, how many more people can watch the same movie?

30. What is the missing number in the box?

$$4\ 503 + \boxed{\phantom{000}} = 500 \times 10$$

31. Mary has 10 toys. Siti has twice as many toys as Mary. How many toys must Siti give Mary so that they have the same number of toys?

32. What is the quotient when 88 is divided by 7?

33. In the set of numbers given below, underline the number with the greatest value and circle the one with the smallest value.

3 059, 3 095, 3 950, 3,590

34. A set of 9 numbers is shown below.  
Which two odd numbers in the given set have a difference of 6?

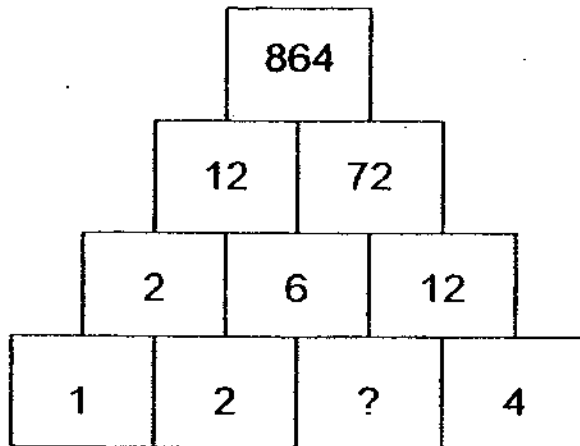
10	11	12	13	14	15	16	17	18
----	----	----	----	----	----	----	----	----

and

35. Gopal has written a number on his whiteboard.  
The number is more than 20 but less than 30.  
It can be divided by 3, 4 and 6 without any remainder.  
What is the number written by Gopal?

Go to page 12

36. What is the missing number in the box?





37. Apples were sold at 3 for \$1 or at 40 cents each.  
What was the least amount Mrs Tan had to pay for 10 such apples?

38. What is the difference between 4 000 and 1 096?

Go to page 13

39. What is the amount of money shown below?



40. What is the value shown in the table below?

Thousands	Hundreds	Tens	Ones

Go to page 14


**Section C** (5 x 4 marks)

Solve the following problems. Show all your working clearly.

41. A truck had 680 cartons of fruits. The driver delivered 375 cartons of fruits to the supermarket. On its way back, the truck met with an accident and 178 cartons of fruits fell onto the road. How many cartons of fruits were left on the truck?
42. Shirley had a pizza party. She ordered 12 boxes of pizzas. There were 8 slices of pizzas in each box. If each person ate 3 slices of pizzas and there were no pizzas left, how many people attended the party?

Go to page 15

43. Mrs Lee bought 2 packets of cheese and 2 cartons of milk for breakfast. She gave the cashier 2 ten-dollar notes. How much change did she get?



Go to page 16

44. Ailing, Beth and Catherine have 352 seashells altogether. Beth has 49 seashells. Catherine has 5 times as many seashells as Beth.
- (a) How many seashells does Catherine have?
  - (b) How many seashells does Ailing have?
- 
45. Tom had 462 stamps. After giving some stamps away, he now had half the number of stamps that Muthu had. If Muthu had 270 stamps, how many stamps did Tom give away?

End of Paper

---

**EXAM PAPER 2009****SCHOOL : MGS PRIMARY**  
**SUBJECT : PRIMARY 3 MATHEMATICS****TERM : SA1**

---

Q1	Q2	Q3	Q4	Q5	Q6	Q7	Q8	Q9	Q10	Q11	Q12	Q13	Q14	Q15	Q16	Q17
4	2	4	4	1	3	4	3	1	3	2	3	2	4	4	2	2

Q18	Q19	Q20	Q21	Q22			Q23	Q24
2	4	3	8	Two thousand, eight hundred and ninety-three			5137	7623

Q25	Q26	Q27	Q28	Q29	Q30	Q31	Q32
3	6	22	100	32	497	5	12

33)3059    34)11 and 17    35)24    36)3    37)\$3.40    38)2904

39)\$28.15    40)3508

41)375+178=553

$$680-553=127$$

There were 127 fruits left on the truck.

42)12x8=96

$$96 \div 3 = 32$$

32 people attended the party.

43)\$3.55+\$3.55=\$7.10

$$\$2.70+\$2.70=\$5.40$$

$$\$7.10+\$5.40=\$12.50$$

$$\$20-\$12.50=\$7.50$$

She got \$7.50 change back.

44)49x5=245

Catherine have 245 seashells.

$$245+49=294$$

$$352-294=58$$

Ailing have 58 seashells.

45)270 ÷ 2=135

$$135+192=327$$

Tom gave 327 stamps away.