


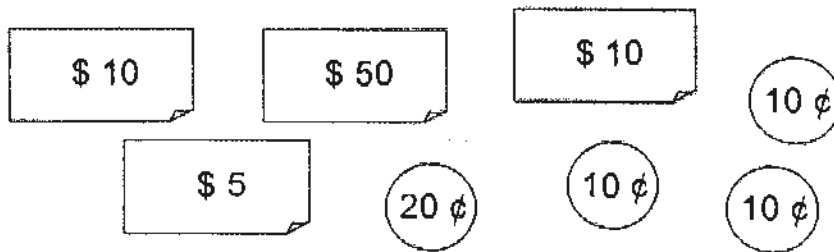


4. The clock below shows the time Fred had his dinner yesterday.  
What time did he have his dinner?



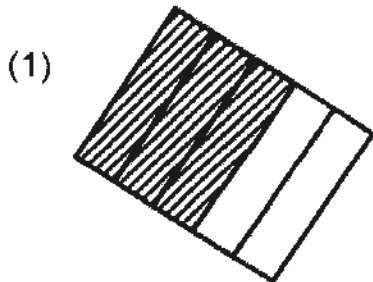
- (1) 7 a.m.                      3) 12. 35 a.m.  
(2) 7 p.m.                      4) 12. 35 p.m.                      (     )

5. Mr. Lim has some notes and coins in his wallet.  
How much money does he have?



- (1) \$55.50                      (3) \$75.50  
(2) \$65.50                      (4) \$85.50                      (     )

6. Which one of the following has  $\frac{1}{2}$  of its shape shaded?



(     )

7. Henry had 40 stickers.

He bought 5 more stickers.

How many stickers did he have altogether?

Choose the correct number sentence to solve the problem.

(1)  $40 + 5 = 45$

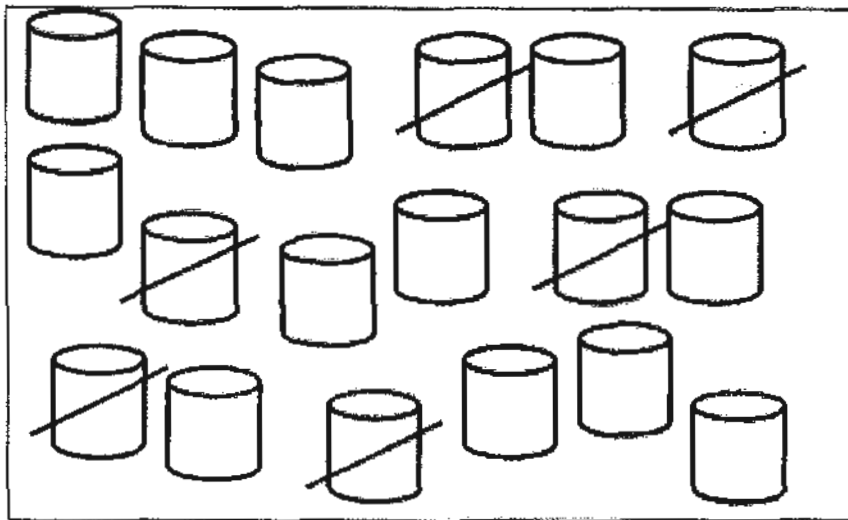
(3)  $40 \times 5 = 200$

(2)  $40 - 5 = 35$

(4)  $40 \div 5 = 8$

( )

8. Choose a correct **subtraction** sentence for the picture below.



(1)  $17 - 6 = 11$

(3)  $18 - 7 = 11$

(2)  $18 - 6 = 12$

(4)  $19 - 7 = 12$

( )

9. The length of the whiteboard in my classroom is about \_\_\_\_\_.

(1) 3 cm

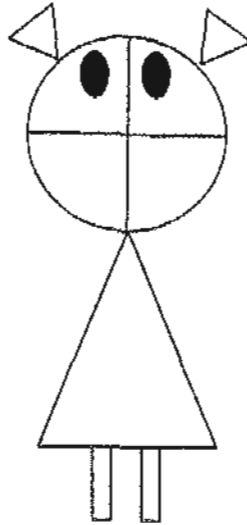
(3) 3 m

(2) 30 cm

(4) 30 m

( )

10. There are \_\_\_\_\_ quarter circles and \_\_\_\_\_ triangles in the figure below.




(1) 2, 3

(3) 4, 2

(2) 4, 3

(4) 6, 3

( )

11.  x  = 18

 +  +  +  = 24

 +  = ?

(1) 6

(3) 11

(2) 9

(4) 42

( )

12.

$$2 \times 3 = 18 \square 3$$

Choose the correct sign for the above number sentence.

(1) +

(3) X

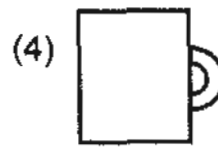
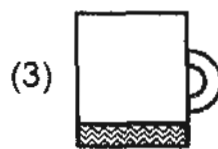
(2) -

(4) ÷

( )

13. Study the pictures carefully.

If 1 full jar of water fills 6 cups. How much water should the jar have to fill 3 cups?



( )

**Section B: (28 x 2 marks)**

Work out these questions carefully and write their answers in the boxes or blanks provide.


14.  is 10 more than 593.

15. Do the sum.

$$\begin{array}{r} 546 \\ + 378 \\ \hline \end{array}$$

16. Subtract 465 from 702. The answer is .

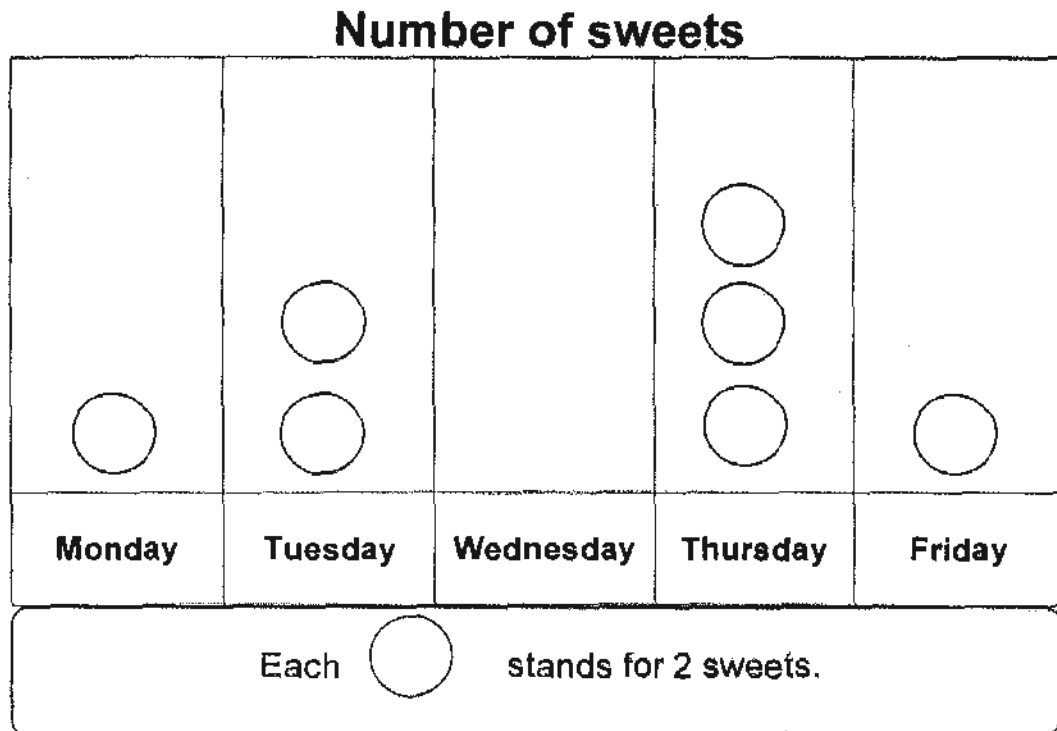
17. Measure the lines below.



Line  is about 7cm long.

18. The picture graph below shows the number of sweets Johnny ate from Monday to Friday.

Johnny ate 18 sweets in total. Complete the graph below to show the number of sweets he ate on Wednesday.



19. Look at the word below.

**FUN**

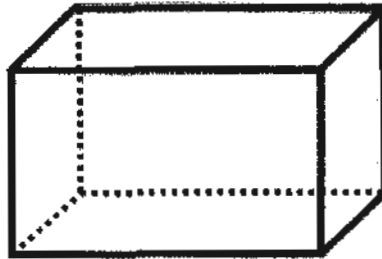
The word is made up  curved line(s)

and  straight line(s).

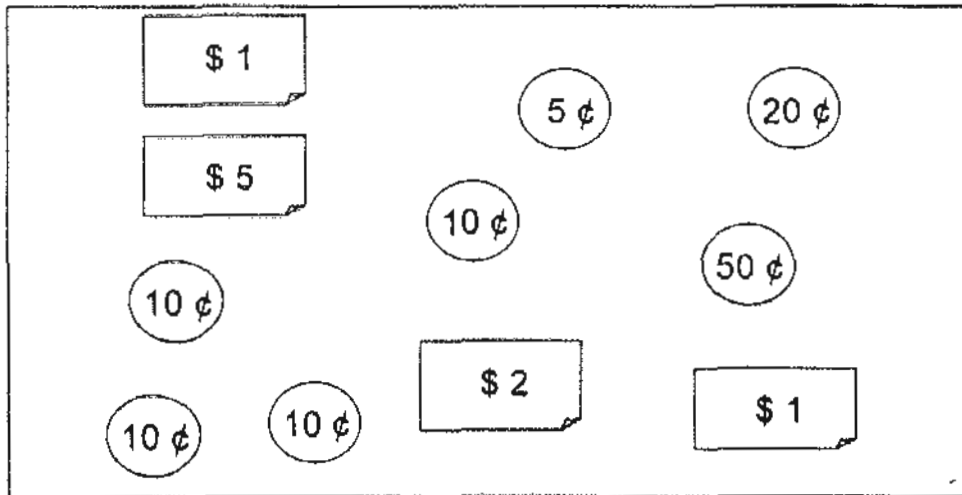
20. The wooden block below has  flat surface(s) and



curved surface(s).




21. In the box below, colour the correct number of notes and coins to make up \$10.



22. Arrange the set of fractions below in order. Begin with the **greatest**.

$$\frac{1}{3}, \frac{1}{2}, \frac{1}{7}, \frac{1}{5}$$



greatest

23. Add 23 to 472.

The digit  is in the **tens** place.

24.  $24 + \text{} = 837$

25.  $\text{} - 542 = 282$

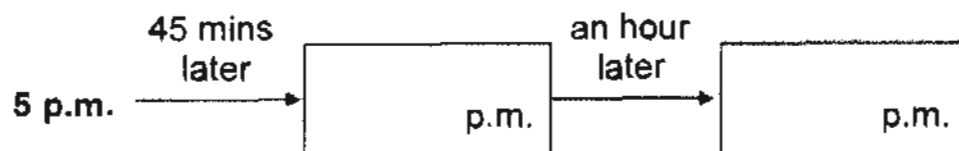
26. Jeff reached home at 5 p.m. last night.

Then, he took 45 minutes to eat his dinner.

After his dinner, he started doing his homework for an hour.

What time did he finish doing his homework?

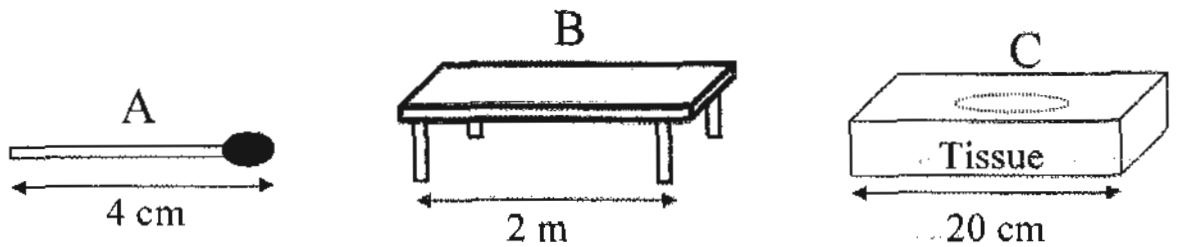
(Hint: Fill in the time-line below to work out your answer.)



27. Raju goes for his speech and drama lesson at 2 p.m. every Sunday.  
The lesson ends at half past 3.  
How long is the lesson?

h     min

28. Arrange the objects (A, B and C) in order. Begin with the **longest**.  
(Objects are not drawn to scale)






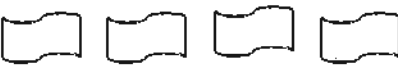
,  ,

longest


29. Daniel leaves his house at 11.40 a.m. to go to school.  
He takes 5 minutes to walk to the roadside and he boards the bus at 11.50 a.m.  
The bus ride is 20 minutes.  
What time will he reach the school?

p.m.

The picture graph below shows the number of stamps 4 children collected.  
Study it and answer questions 30 and 31.


Number of stamps	
Alice	
James	
Megan	
Ricky	

30. Who has **twice** as many stamps as Alice?

31. The children have a total of 27 stamps altogether.  
How many stamps does each  stand for?

 stamps

32. Fill in the blanks with the correct names of the shapes that make up the figure below.



The figure above is made up of one  and  
one .

33. Ben bought a pencil case for \$7 and two pencils for \$1 each. He gave the cashier a \$10 note. How much change did he receive?

\$

34. What fraction of the shape below is not shaded?



35. Sam and Alan played a counting game.

They started counting together at the same time.

Sam counted forward by hundreds from the number 100.

Alan counted backwards by tens from the number 200.

If Sam is at the number 300, which number will be Alan at?

36. A shopkeeper sold 346 eggs on Tuesday.

He sold 78 more eggs on Wednesday than on Tuesday.

How many eggs did he sell on both days?

 eggs

37. The total price of 5 similar umbrellas and 1 raincoat is \$58.

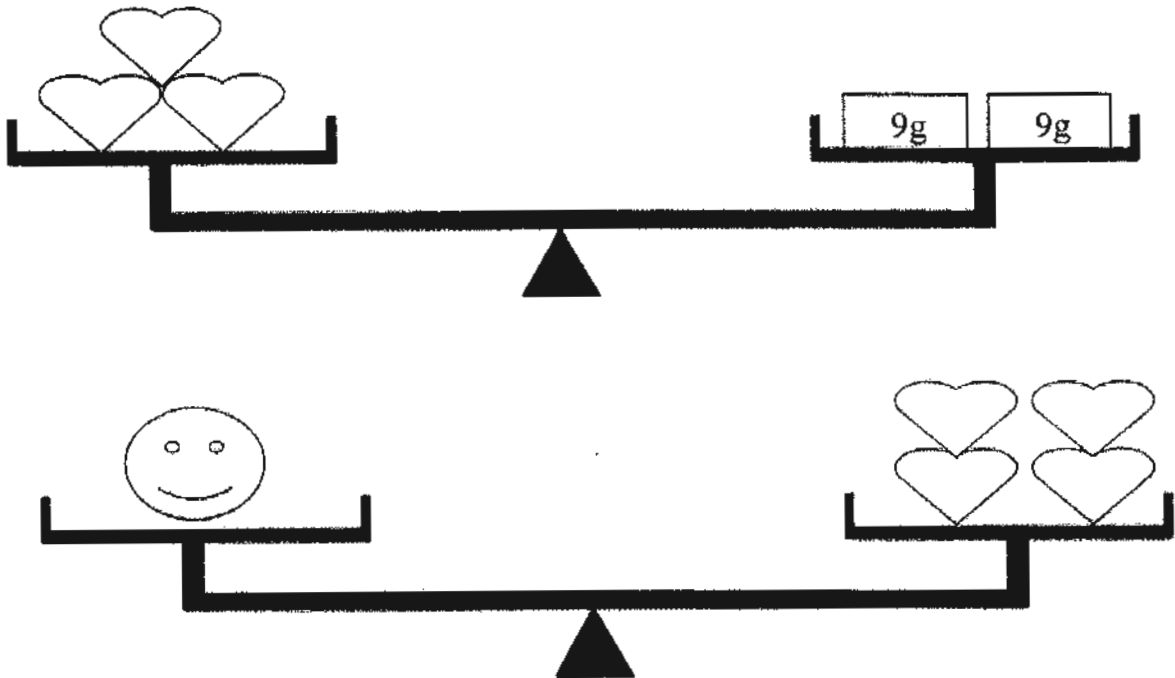
If the raincoat cost \$8, how much does each umbrella cost?


 \$

38. Mary has 112 paper clips.  
Kate has 17 more paper clips than Mary.  
How many paper clips does Kate have?

paper clips

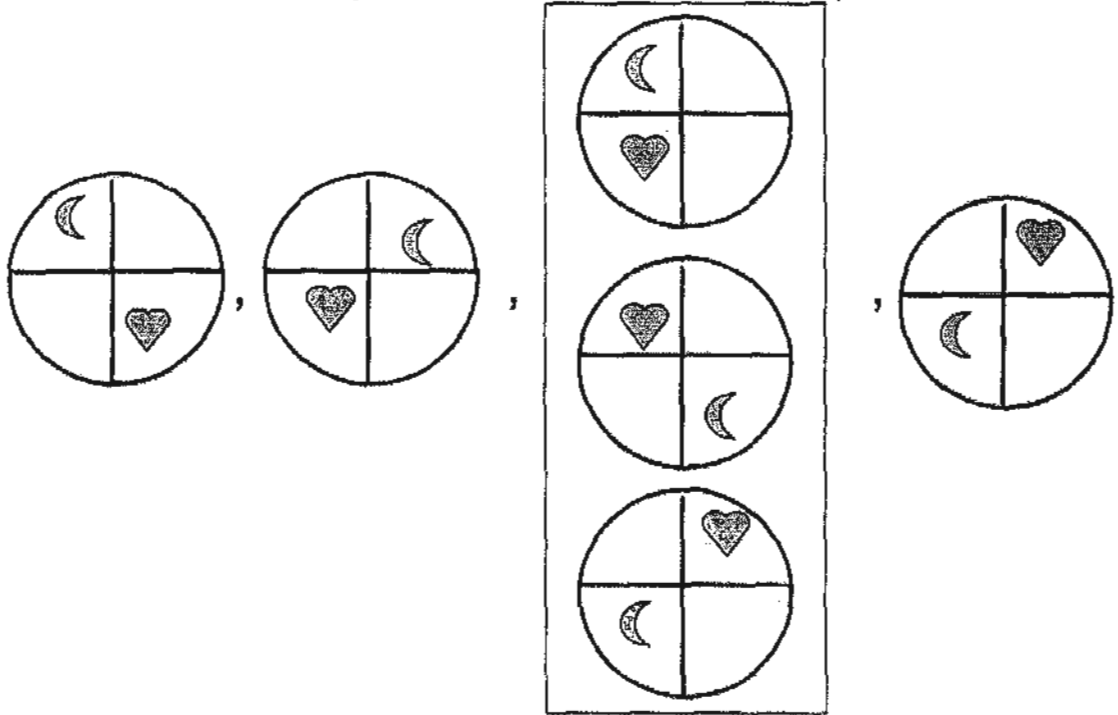
39. Look at the pictures below.



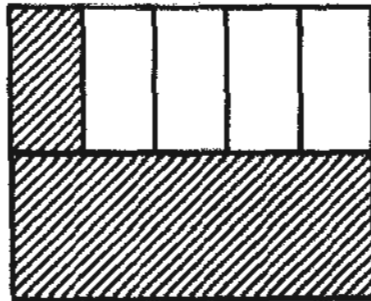
The mass of the  is about  g.

40. Look at the pattern.

Circle the correct object in the box to complete the pattern.



41. What fraction of the figure below is unshaded?



**Section C: (6 x 3 =18 marks)**

**Show all number sentences and working clearly in the space provided.**

42. 4 key chains cost as much as 5 notebooks.

If each keychain costs \$10, how much does 1 notebook cost?

1 notebook costs \$ \_\_\_\_\_.

43. Lilly bought 3 packets of hairpins.

Each packet contained 7 hairpins.

She gave 12 hairpins to her sister.

How many hairpins did Lily have left?

Lily had \_\_\_\_\_ hairpins left .

44. Jackson had 36 books.

He gave 4 books away and put the remaining books equally on 4 shelves.

How many books did he put on each shelf?

He put \_\_\_\_\_ books on each shelf.

45. A container filled with pebbles has a mass of 950g.

The mass of the pebbles is 736g.

Melvin removes all the pebbles and puts in marbles.

The marbles weighed 483g.

What is the total mass of the container filled with marbles?

The total mass of the container filled with marbles weighs \_\_\_\_\_ g.

46. A blouse cost \$9.  
A skirt cost \$15.  
I bought 5 blouses and a skirt.  
How much change would I receive if I gave the cashier \$100?

I would receive \$ \_\_\_\_\_ change.

47. Fanny cut a pizza into 12 pieces.  
She ate 2 pieces and gave the remaining pieces to Alan and Betty  
equally.  
What fraction of the pizza did Betty receive?

Betty received \_\_\_\_\_ of the pizza.

-----The End-----

Setters: Ms Kim Ang Kai Mei  
Mdm Doris Yap

Have you checked your  
work?



# ANSWER SHEET

## EXAM PAPER 2010

SCHOOL : RAFFLES GIRLS' PRIMARY  
SUBJECT : PRIMARY 2 MATHEMATICS

TERM : SA2

Q1	Q2	Q3	Q4	Q5	Q6	Q7	Q8	Q9	Q10	Q11	Q12	Q13
2	4	4	2	3	3	1	2	3	2	2	4	2

14) 603

15) 924

16) 237

17) EF

18) Wednesday:



19) 1

20) 6

21) 6,0

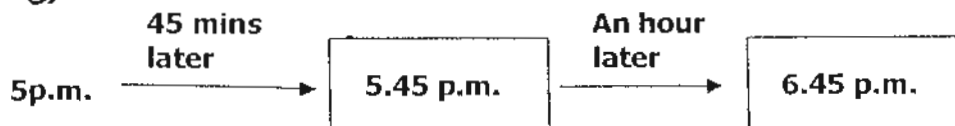
22)  $\frac{1}{2}$ ,  $\frac{1}{3}$ ,  $\frac{1}{5}$ ,  $\frac{1}{7}$

23) 9

24) 813

25) 824

26)



27) 1 h 30 mins

28) B, C, A

29) 12.10

30) Ricky

31) 3

32) rectangle, triangle

33) \$1

34)  $\frac{3}{8}$

35) 280

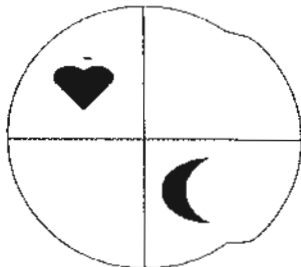
36) 770

37) \$10

38) 129

39) 24

40)



41)  $\frac{2}{5}$

42) $\$10 \times 4 = \$40$ $\$40 \div 5 = \underline{\$8}$	43) $3 \times 7 = 21$ $21 - 12 = \underline{9}$
44) $36 - 4 = 32$ $32 \div 4 = \underline{8}$	45) mass of container $\rightarrow 950 - 736$ $= 214\text{g}$ Total mass of container and marbles $= 214 + 483$ $= \underline{697\text{g}}$
46) $\$9 \times 5 = \$45$ $\$45 + \$15 = \$60$ $\$100 - \$60 = \underline{\$40}$	47) $1 - \frac{2}{12} = \frac{10}{12}$ $\frac{10}{12} \div 2 = \underline{\frac{5}{12}}$