

Name : _____ ()

Class : Primary 5 _____

CHIJ ST NICHOLAS GIRLS' SCHOOL (PRIMARY)



PRIMARY 5

CONTINUAL ASSESSMENT 2

MATHEMATICS

24 August 2010

PAPER 1
(Booklet A)

TOTAL TIME FOR BOOKLETS A AND B: 50 MINUTES

INSTRUCTIONS TO CANDIDATES

DO NOT TURN OVER THIS PAGE UNTIL YOU ARE TOLD TO DO SO.
FOLLOW ALL INSTRUCTIONS CAREFULLY.
ANSWER ALL QUESTIONS.
SHADE YOUR ANSWERS IN THE OPTICAL ANSWER SHEET (OAS) PROVIDED.
THE USE OF CALCULATORS IS NOT ALLOWED.

This booklet consists of 6 printed pages including the cover page.

Questions 1 to 10 carry 1 mark each. Questions 11 to 15 carry 2 marks each. For each question, four options are given. One of them is the correct answer. Make your choice (1, 2, 3 or 4). Shade the correct oval (1, 2, 3, 4) on the Optical Answer Sheet (OAS). (20 marks)

- 1) How many quarters are there altogether in $11\frac{1}{2}$?
- (1) 23
 - (2) 28
 - (3) 45
 - (4) 46
- 2) Find the value of $60 + (7 - 2) - 10 \div 5 \times 2$.
- (1) 22
 - (2) 58
 - (3) 61
 - (4) 126
- 3) How many centimeters are there altogether in 23.02m?
- (1) 2.032 cm
 - (2) 2.32 cm
 - (3) 2302 cm
 - (4) 2320 cm

- 4) A number, when rounded off to 2 decimal places, is 32.50.
What is the number?
- (1) 32.406
 - (2) 32.495
 - (3) 32.597
 - (4) 32.505
- 5) There are 270 people at an auction. 30% of them were locals and the rest were expatriates. How many more expatriates were there?
- (1) 81
 - (2) 108
 - (3) 162
 - (4) 189
- 6) The ratio of Carol's mass to Siti's mass is 4 : 3. If Siti's mass is 36 kg, what is their total mass?
- (1) 27 kg
 - (2) 48 kg
 - (3) 63 kg
 - (4) 84 kg

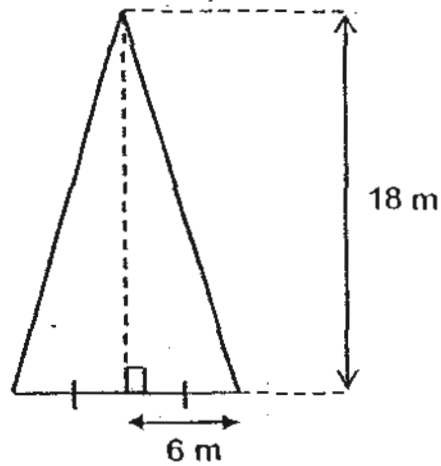
7) What is one hundredth less than 875.1?

- (1) 875
- (2) 875.099
- (3) 875.09
- (4) 875.11

8) Find the product of 4.097 and 10 tens.

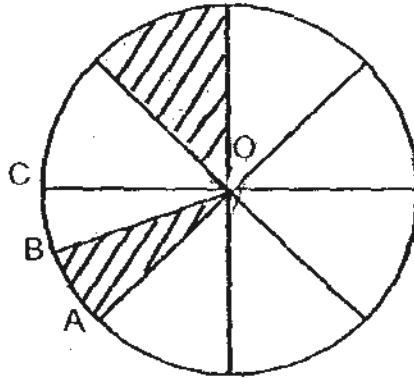
- (1) 40.97
- (2) 409.70
- (3) 4 097
- (4) 40 970

9) What is the area of the triangle?



- (1) 27 m^2
- (2) 54 m^2
- (3) 108 m^2
- (4) 216 m^2

- 10) The circle is divided into 8 equal parts. Given that $\angle OAB$ is 50% of $\angle OAC$, what percentage of the figure below is shaded?



- (1) 18.75 %
(2) 12.5 %
(3) 37.5 %
(4) 68.75 %
- 11) If 9 apples cost \$6, how much will 24 apples cost?
- (1) \$0.66
(2) \$2.00
(3) \$16.00
(4) \$36.00

12) The height of a triangle is thrice the base. If the height is 30 cm, what is the area of the triangle?

(1) 2700 cm^2

(2) 1350 cm^2

(3) 300 cm^2

(4) 150 cm^2

13) Saravanan collects stamps as a hobby. $\frac{1}{5}$ of his stamps are Singapore stamps, $\frac{1}{4}$ of them are Malaysia stamps and the rest are China stamps. What percentage of the total number of stamps collected is China stamps?

(1) 55%

(2) 45%

(3) 75%

(4) 95%

14) Grandpa Joe bought some mangoes and avocados for \$86.50. A mango and an avocado cost \$11.00 in all. He bought more mangoes than avocados and the mangoes cost \$42.50 more. How many avocados did he buy?

(1) 2

(2) 4

(3) 5

(4) 9

15) In a cooking class, 42 of them were females and the remaining 8 people were males. What percentage of all the people in the cooking class were males?

(1) 16%

(2) $19\frac{1}{21}\%$

(3) $80\frac{20}{21}\%$


(4) 84%

End of Booklet A

Name : _____ ()

Class : Primary 5 _____

CHIJ ST NICHOLAS GIRLS' SCHOOL (PRIMARY)



PRIMARY 5

CONTINUAL ASSESSMENT 2

MATHEMATICS

24 August 2010

PAPER 1
(Booklet B)

Booklet A	120
Booklet B	120
Total	140

TOTAL TIME FOR BOOKLETS A AND B: 50 MINUTES

INSTRUCTIONS TO CANDIDATES

DO NOT TURN OVER THIS PAGE UNTIL YOU ARE TOLD TO DO SO.
FOLLOW ALL INSTRUCTIONS CAREFULLY.
ANSWER ALL QUESTIONS.
WRITE YOUR ANSWERS IN THIS BOOKLET.
THE USE OF CALCULATORS IS NOT ALLOWED.

This booklet consists of 8 printed pages including the cover page.

Questions 16 to 25 carry 1 mark each. Write down your answers in the spaces provided. For questions which require units, give your answers in the units stated. [10 marks]

Do not write in this space

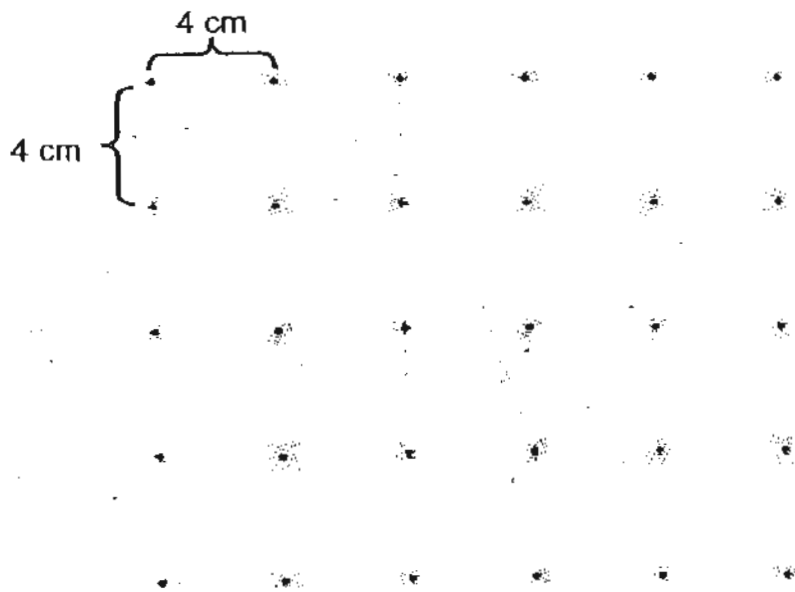
16) Express $\frac{19}{25}$ as a percentage.

Ans : _____ %

17) Write 0.8 as a fraction in its simplest form.

Ans : _____

18) Draw a triangle which has an area of 24 cm^2



Do not
write
this s

- 19) 240 girls and 560 boys took part in a mini-marathon. How many percent of the participants were boys?

Ans : _____ %

- 20) Aunt Linda bought a roll of ribbon. She made 6 bows of 1.4 m each. Then she tied 5 parcels using 2.2 m for each parcel. Finally she had 10.6 m left. How long was the roll of ribbon when she first bought it?

Ans : _____ m

- 21) Ali has six times as many marbles as Norman. The ratio of the number of Norman's marbles to the number of Ray's marbles is 5 : 3. Find the ratio of the number of Ali's marbles to the number of Ray's marbles.

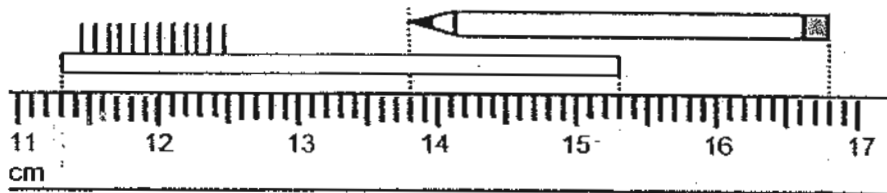
Ans : _____

- 22) The sum of two numbers is 24.8. The ^{smaller} ~~bigger~~ number is the product of 0.1 and 17. What is the ~~smaller~~ ^{bigger} number?

Do not
write in
this space

Ans : _____

- 23) What is the ratio of the length of the toothbrush to the length of the pencil?



Ans : _____

- 24) Elle is 25 years old now. She is $\frac{5}{9}$ of her mother's age. How old will her mother be in 8 years' time?

Ans : _____

- 25) At a party, 12 jugs of the same size contain 14 400 ml of orange juice. How many litres of orange juice are there in 80 such jugs?

Ans : _____ l

Do not
write in
this space

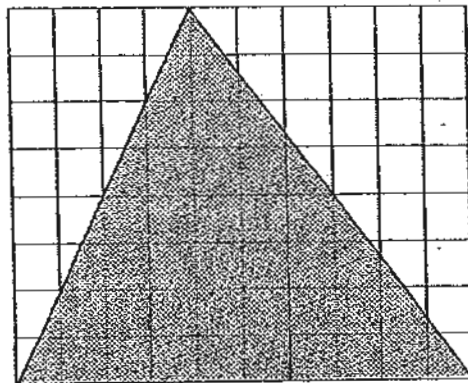
Questions 26 to 30 carry 2 marks each. Show your working clearly and write your answers in the spaces provided. For questions which require units, give your answers in the units stated. [10 marks]

Do not write in this space

- 26) Two tanks, A and B, each contains goldfish and guppies. $\frac{4}{7}$ of the fish in Tank A are goldfish and $\frac{4}{5}$ of the fish in Tank B are goldfish. Both tanks have the same number of goldfish. Tank A contains 240 more guppies than Tank B. How many goldfish and guppies does Tank A contain altogether?

Ans : _____

- 27) Find the area of the triangle. (Each small square is 4 cm^2).



Ans : _____ cm^2

28) The ~~usual~~ price of a bicycle was \$408. Mr Aladdin bought it at a discount of 25%. How much did he pay for the bicycle including 7% GST?

Do not
write in
this space

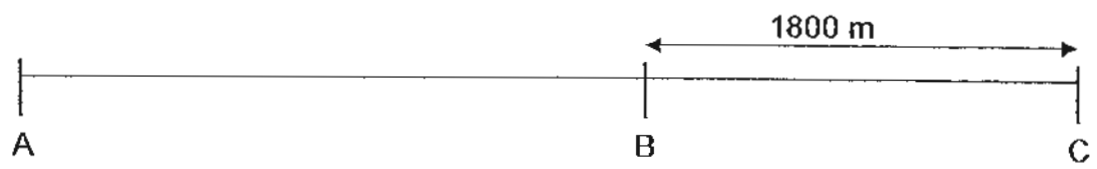
Ans : \$ _____

29) A black pole is 0.35 m shorter than a red pole and thrice as long as a green pole. The red pole is longer than the green pole by 90.8 cm. What is the length of the green pole? Leave your answer in cm.

Ans : _____ cm

- 30) Kenny jogged from point A to point B to point C along Greenside Park. The ratio of the distance of AB to the distance of AC is 9 : 14. Find the distance that Kenny jogged from point A to point C.

Do not write in this space




Ans : _____ m



Name : _____ ()

Class : Primary 5 _____

CHIJ ST NICHOLAS GIRLS' SCHOOL (PRIMARY)



PRIMARY 5

CONTINUAL ASSESSMENT 2

MATHEMATICS

24 August 2010

PAPER 2

Parent's/Guardian's Signature

Paper 1	40
Paper 2	60
Total Mark	100

TOTAL TIME FOR PAPER 2 : 1 HOUR 40 MINUTES

INSTRUCTIONS TO CANDIDATES

DO NOT TURN OVER THIS PAGE UNTIL YOU ARE TOLD TO DO SO.

FOLLOW ALL INSTRUCTIONS CAREFULLY.

ANSWER ALL QUESTIONS.

WRITE YOUR ANSWERS IN THIS BOOKLET.

THE USE OF AN APPROVED CALCULATOR IS EXPECTED, WHERE APPROPRIATE.

This booklet consists of 14 printed pages including the cover page.

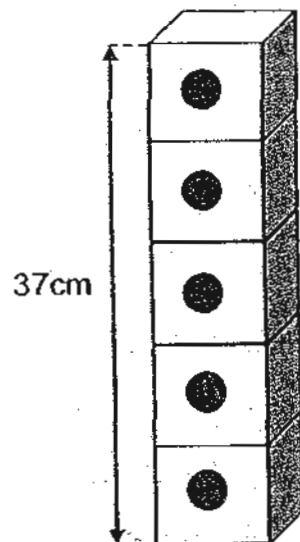
Questions 1 to 5 carry 2 marks each. Show your working clearly and write your answers in the spaces provided. For questions which require units, give your answers in the units stated. [10 marks]

Do not write in this space

- 1) Alice, Barbie and Chole shared some beads in the ratio 5 : 2 : 8. When Chole gave 2730 beads to Alice, Alice had 4 times as many beads as Barbie. How many beads did they share?

Ans : _____

- 2) Five identical dice were stacked to form a height of 37 cm. If 133 such dice were to be stacked, one on top of the other, what would the total height be? Leave your answer in metres correct to 2 decimal places.



Ans : _____ m

- 3) The table below shows the different rates that a technician is paid working in a computer company.

Day	Rate per day
Monday to Friday	\$64.50
Saturday & Sunday	\$132.50

There are a total of 450 technicians working in the company. Each of them works from Monday to Friday. 50% of them work on weekends. What is the total amount that the company needs to pay all the technicians in a week?

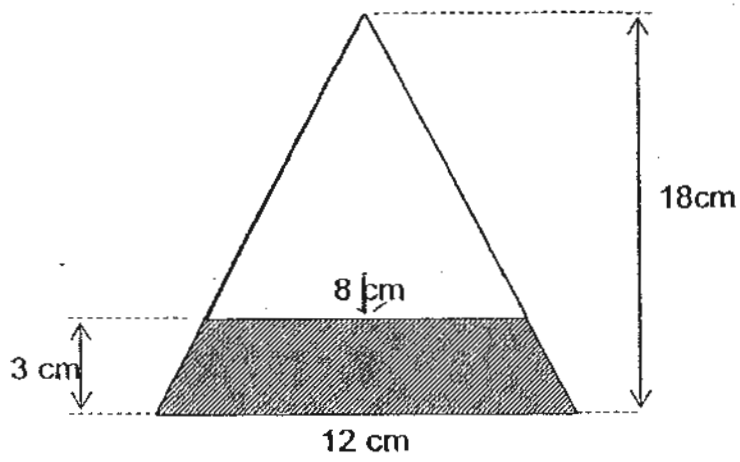
Ans : \$ _____

- 4) Teresa had \$1785. She spent 16% of it on cosmetics, 44% of it on a dress and $\frac{1}{4}$ of the remainder on a bicycle. How much had she left?

Ans : \$ _____

Do not
write in
this space

- 5) Find the area of the shaded part.



Do not write in this space

Ans : _____ cm²

For questions 6 to 18, show your working clearly and write your answers in the spaces provided. The number of marks available is shown in the brackets () at the end of each question or part-question.

[50 marks]

Do not
write in
this space

- 6) Mr John cut a plank into 2 portions, Y and Z. He cut a small piece of length 7.5m from portion Y. His wife cut the remaining portion of Y into another 3 small strips of 260 cm each. Portion Z was 85% of the total length of portion Y. What was the length of the plank before it was cut?

Ans: _____ (3m)

- 7) In a swimming club, the ratio of the number of instructors to the number of swimmers is 1 : 40. The number of male swimmers is $\frac{4}{5}$ of the number of female swimmers. There are 1 200 female swimmers. How many instructors are there in the club?

Ans: _____ (3 m)

- 8) There are 6000 audience watching a concert. 610 of them are children. Another 210 adults and 90 children join in to watch the concert. What percentage of the final number of audience are children?

Do not write in this space

Ans: _____ (3 m)

- 9) Uncle Ronnie wanted to buy a motorcycle at the lowest possible cost. He had two options to pay for the motorcycle.

Option	Type of payment plan
A	Pay a deposit of \$8880 and a monthly instalment of \$1055 for 2 years
B	Make a full payment of \$30 678.

- a) Which option would he select?
- b) How much would he save if he selected the option with the lowest possible cost?
- a)

Ans: a) _____ (2 m)

b) _____ (1 m)

- 10) The ratio of the number of soccer balls to that of basketballs in a storeroom was 2 : 3. When another 144 balls were put into the storeroom, there were twice as many soccer balls and thrice as many basketballs. How many soccer balls and basketballs were there in the storeroom originally?

Ans: _____ (3m)

- 11) Aunt Lucy had \$2990 at first. She spent 30% of her money on bags and \$1338 on a watch. What percentage of her money had she left? Leave your answer correct to 2 decimal places.

Ans: _____ (4m)

- 12) Zach had a total of 2050 black and red marbles. He lost $\frac{3}{5}$ of his black marbles and bought another 150 red marbles. As a result, the number of red marbles he had was $\frac{1}{4}$ of the remaining black marbles. How many more black marbles than red marbles had he at first?

Do not write in this space.

Ans: _____ (4m)

- 13) Uncle Vincent had \$6300. He gave 30% of his money to his daughter and shared the rest among his three sons, Alan, Ben and Charlie in the ratio 5 : 7 : 3. Alan used 40% of his share to buy a lap-top. How much money did he have left?

Do not
write in
this spx

Ans: _____ (4m)

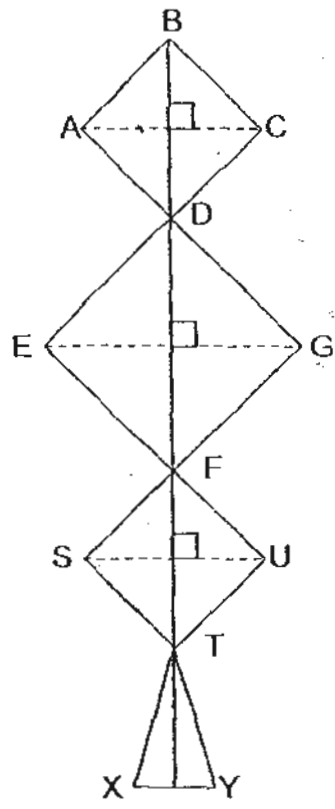
- 14) The total cost of 5 shirts and 3 pairs of jeans was \$390.50. The total cost of a shirt and a pair of jeans was \$117.30. Lionel used twenty \$50 notes to pay for 9 shirts and 7 pairs of jeans. How much change did he receive?

Do not
write in
this space.

Ans: _____ (4m)

Do not write in this space

- 15) The figure, not drawn to scale, shows 3 squares and a triangle. Square ABCD and square STUF are identical. The area of triangle TXY is 40% of the difference between the area of square ABCD and the area of square DEFG. The length of BD is 350 cm. If the ratio of the length of BF to the length of BD is 3 : 1, find the area of the whole figure. Leave your answer in metres.



Ans: _____ (4m)

16) Rose had \$2 480. When she gave her sister \$680, she found that she had twice as much money as what her sister had finally.

a) How much did her sister have at first?

b) Rose used her remaining money to buy 3 identical dresses and a pair of boots. If the pair of boots cost \$120 and each dress cost \$39.25 more than the pair of boots, how much money did she have left in the end?

Do not
write in
this space.

Ans: (a) _____ (2m)

(b) _____ (3m)

17) Vanessa, Hilton and Dolly were given a box of sweets. Vanessa took $\frac{1}{3}$ of the sweets and another 20 from the box. Hilton took 0.5 of the remainder and another 40 from the box. Dolly took the remaining 30 sweets and there were no sweets left in the box.

- a) How many sweets were there in the box at first?
- b) How many sweets did Hilton have finally?

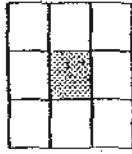
Do not
write in
this spac

Ans: (a) _____ (3m)

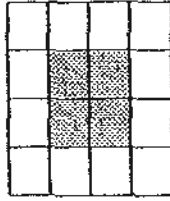
(b) _____ (2m)

18) An artist designed a pattern using dotted tiles and white tiles.

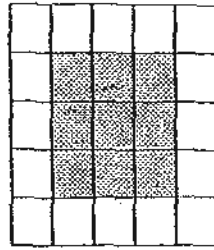
Do not write in this space



Pattern 1



Pattern 2



Pattern 3

a) Complete the table below.

(1m)

Pattern	Number of dotted tiles	Number of white tiles	Total number of tiles
1	1	8	9
2	4	12	16
3	9	16	25
⋮	⋮	⋮	⋮
18	324	_____	400

b) What the ern number will have a total of 1 156 tiles?

c) What is the difference between the number of dotted tiles and the number of white tiles in pattern 53?

Ans: (b) _____ (2m)

(c) _____ (2m)

End of Paper

ANSWER SHEET

EXAM PAPER 2010

SCHOOL : CHIJ PRIMARY
SUBJECT : PRIMARY 5 MATHEMATICS

TERM : CA2

Q1	Q2	Q3	Q4	Q5	Q6	Q7	Q8	Q9	Q10	Q11	Q12	Q13	Q14	Q15
4	3	3	2	2	4	3	2	3	1	3	4	1	2	1

- 16) 76% 17) 4/5 18) 19) 70% 20) 30m
 21) 10:1 22) 23.1 23) 4:3 24) 53
 25) 96L 26) 840 27) 160cm² 28) \$372.42 29) 27.9cm
 30) 5040m



Paper 2

1) $3u \rightarrow 2730$ $1u \rightarrow 910$ $5u + 2u = 8u = 15u$ $910 \times 15 = 13650$ They shared 13650 beads	2) $37 \div 5 = 7.4$ $7.4 \times 133 = 984.2$ $984.2\text{cm} = 9.842\text{m}$ $9.842\text{m} \approx 9.84\text{m}$ The total height is 9.84m
3) Mon to Fri \rightarrow 5 days $\$64.50 \times 5 = \322.50 $450 \times 322.50 = \$145125$ $450 \times 50\% = 225$ Sat to Sun \rightarrow 2 days $\$132.50 \times 2 = \265 $225 \times \$265 = \59625 $\$59625 + \$145125 = \$204750$	4) $\$1785 \times 16\% = \285.60 $\$1785 \times 44\% = \785.40 $\$1785 - \$285.60 - \$785.40 = \714 $\$714 \times \frac{1}{4} = \178.50 $\$714 - \$178.50 = \$535.50$ She had \$535.50
5) $18 - 3 = 15$ $15 \times 8 \times \frac{1}{2} = 60$ $18 \times 12 \times \frac{1}{2} = 108$ $108 - 60 = 48$ The area 48cm ²	6) $260 \times 3 = 780$ $7.5\text{m} = 750\text{cm}$ $750 + 780 = 1530$ $1530 \times 85\% = 1300.5$ $1300.5 + 1530 = 2830.5$ The length was 2830.5 cm

<p>7) $1200 \times \frac{4}{5} = 960$ (male) $960 + 1200 = 2160$ $2160 \div 40 = 54$ $54 \times 1 = 54$ There are 54 instructors</p>	<p>8) $210 + 90 = 300$ $300 + 6000 = 6300$ $90 + 610 = 700$ $700/6300 \times 100\% = 11\frac{1}{9}\%$ $11\frac{1}{9}\%$ of the audience are children</p>
<p>9)a) 2 years \rightarrow 24 months $\\$1055 \times 24 = \\25320 $\\$25320 + \\$8880 = \\$34200$ A: $\\$34200$ B: $\\$30678 \rightarrow$ cheaper He would select option B. b) A: $\\$34200$ B: $\\$30678$ $\\$34200 - \\$30678 = \\$3522$ He would save $\\$3522$</p>	<p>10) $2 \times 2 = 4$ $3 \times 3 = 9$ $4 : 9$ $4u - 2u = 2u$ $9u - 3u = 6u$ $2u + 6u = 8u$ $144 \div 8 = 18$ $2u + 3u = 5u$ $18 \times 5 = 90$ There were 90 balls originally</p>
<p>11) $\\$2990 \times 30\% = \\897 $\\$897 + \\$1338 = \\$2235$ $\\$2990 - \\$2235 = \\$755$ $755/2990 \approx 25.251/100$ $\approx 25.25/100 = 25.25\%$ The percentage is 25.25%</p>	<p>12) $11u \rightarrow 2050 + 150 = 2200$ $1u \rightarrow 2200 \div 11 = 200$ $10 \times 200 = 2000$ (at first) Red: $200 - 150 = 50$ (at first) $2000 - 50 = 1950$ He had 1950 more black than red marbles at first.</p>
<p>13) $\\$6300 \times 30\% = \\1890 $\\$6300 - \\$1890 = \\$4410$ $5u + 7u + 3u = 15u$ $\\$4410 \div 15 = \\294 $\\$294 \times 5 = \\1470 $100\% - 40\% = 60\%$ $\\$1470 \times 60\% = \\882 He had $\\$882$ left.</p>	<p>14) $\\$38.60 + \\$821.10 = \\$859.70$ $\\$1000 - \\$859.70 = \\$140.30$ She received $\\$140.30$ change</p>
<p>15) $44.1m^2$</p>	<p>16)a) $\\$2480 - \\$680 = \\$1800$ (remaining) $\\$1800 \div 2 = \\900 $\\$900 - \\$680 = \\$220$ She had $\\$220$ at first. b) $\\$120 + \\$39.25 = \\$159.25$ (dress) $3 \times \\$159.25 + \\$120 = \\$597.75$ $\\$1800 - \\$597.75 = \\$1202.25$ She had $\\$1202.25$ in the end.</p>
<p>17)a) $\frac{2}{3} \rightarrow 140 + 20 = 160$ $2u \rightarrow 160$ $1u \rightarrow 80$ $3u \rightarrow 80 \times 3 = 240$ There were 240 sweets in the box b) $70 + 40 = 110$ He had 110 sweets</p>	<p>18)a) 76 b) 32 c) 2593</p>